


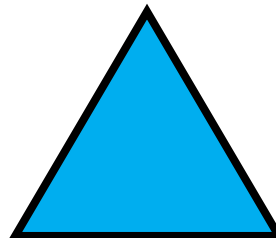




Name: _____

K-126

Identifying
Basic Shapes

Daily Word Problem

Circle all the hexagons.



How many sides does
a hexagon have? _____

Name: _____


K-127


Measurement

Daily Word Problem



Preview
Please log in to download
the printable version of this worksheet.



Circle the  s that are the same length.


Name: _____

K-128

Subtraction
within 20

Daily Word Problem

Mae has 20 balloons.



Preview

Please log in to download
the printable version of this worksheet.

8 balloons pop. Cross them out.

How many balloons are left? _____

_____ - _____ = _____

Name: _____

K-129

Counting to 20

Daily Word Problem

Draw 16 circles in the ten frames.



$$\underline{\quad\quad} + \underline{\quad\quad} = 16$$

Name: _____

K-130

Addition to 20

Daily Word Problem



Preview

Please log in to download the printable version of this worksheet.

How many **orange**  s? _____

How many total  s? _____

$$\underline{\hspace{2cm}} + \underline{\hspace{2cm}} = \underline{\hspace{2cm}}$$