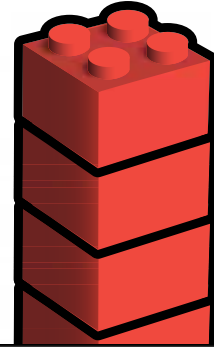



Name: \_\_\_\_\_

**K-131**

Comparing  
(Tallest/Shortest)

## Daily Word Problem



# Preview

Please log in to download  
the printable version of this worksheet.

Circle the tallest block tower.

Cross out the shortest block tower.



Name: \_\_\_\_\_

**K-132**

Addition to 20

## Daily Word Problem

There are ten  in each pond.



# Preview

Please log in to download  
the printable version of this worksheet.

How many  are there? \_\_\_\_\_

\_\_\_\_\_ + \_\_\_\_\_ = \_\_\_\_\_

Name: \_\_\_\_\_

**K-133**

Addition to 20

## Daily Word Problem

Ari has



# Preview

Please log in to download  
the printable version of this worksheet.

How many s  
are there total? \_\_\_\_\_

\_\_\_\_\_ + \_\_\_\_\_ = \_\_\_\_\_


Name: \_\_\_\_\_

**K-134**

Counting to 20

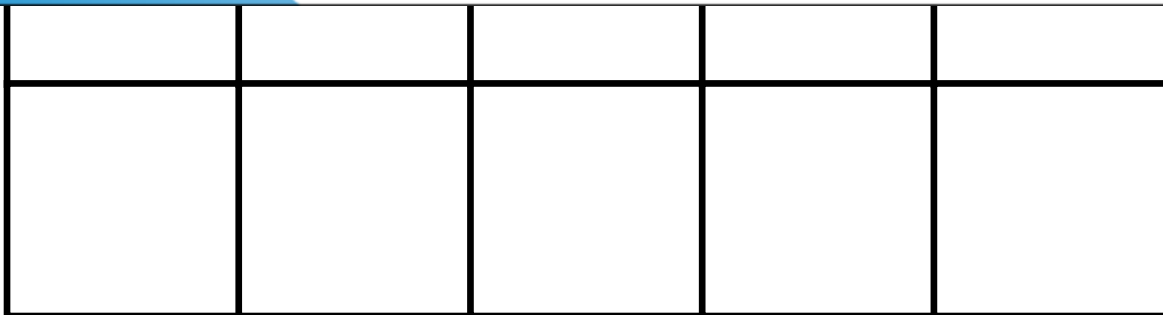
## Daily Word Problem

Draw 7 more circles in the ten frame.



# Preview

Please log in to download  
the printable version of this worksheet.



$$10 + \underline{\quad\quad\quad} = \underline{\quad\quad\quad}$$

Name: \_\_\_\_\_

**K-135**

Subtraction  
within 20


## Daily Word Problem

There are



# Preview

Please log in to download  
the printable version of this worksheet.

How many  s  
are left?

\_\_\_\_\_

\_\_\_\_\_ - \_\_\_\_\_ = \_\_\_\_\_