

Name: \_\_\_\_\_

**K-146**

Comparing  
(Longer/Shorter)

## Daily Word Problem



**Preview**  
Please log in to download  
the printable version of this worksheet.

How many

long is the  ?

\_\_\_\_\_

How many

long is the  ?

\_\_\_\_\_

Circle which is longer.


Name: \_\_\_\_\_

**K-147**


Subtraction  
within 20

## Daily Word Problem

How many s? \_\_\_\_\_



**Preview**  
Please log in to download  
the printable version of this worksheet.



Cross out 10 s. How many are left?

\_\_\_\_\_ - \_\_\_\_\_ = \_\_\_\_\_



Name: \_\_\_\_\_

**K-148**

Addition to 20

## Daily Word Problem

Lee saw



.



# Preview

Please log in to download  
the printable version of this worksheet.

How many s  
did she see total?

\_\_\_\_\_

\_\_\_\_\_ + \_\_\_\_\_ = \_\_\_\_\_



Name: \_\_\_\_\_

**K-149**

Subtraction  
within 20


## Daily Word Problem

There are



# Preview

Please log in to download  
the printable version of this worksheet.

How many  s  
are left?

\_\_\_\_\_

\_\_\_\_\_ - \_\_\_\_\_ = \_\_\_\_\_

Name: \_\_\_\_\_

**K-150**

Comparing  
(Fewest/Most)

## Daily Word Problem

Mom has 16  s. Draw 16 circles below.



Who has the fewest  s? \_\_\_\_\_

Who has the most  s? \_\_\_\_\_