


Name: \_\_\_\_\_

**K-71**

Comparing  
(Fewest/Most)


## Daily Word Problem

Tina has 4



s.

Mei has 2



s.



# Preview

Please log in to download  
the printable version of this worksheet.


Who has the most



s?

\_\_\_\_\_

Who has the fewest



s?


\_\_\_\_\_

Name: \_\_\_\_\_

**K-72**

Identifying  
Basic Shapes

## Daily Word Problem



# Preview

Please log in to download  
the printable version of this worksheet.

How many sides  
does this shape have? \_\_\_\_\_

What shape is this? \_\_\_\_\_

Name: \_\_\_\_\_

**K-73**

Counting By  
Ones

## Daily Word Problem

Count by ones.

Fill in the number that comes next.

1    2    3



# Preview

Please log in to download  
the printable version of this worksheet.



5, \_\_\_\_\_, 7, \_\_\_\_\_

Name: \_\_\_\_\_

**K-74**

Comparing  
(Fewest/Most)

## Daily Word Problem



# Preview

Please log in to download  
the printable version of this worksheet.

How many



s?

\_\_\_\_\_

Are there more



s or



s?


Circle the correct answer.

Name: \_\_\_\_\_

**K-75**

Addition to 10


## Daily Word Problem



# Preview

Please log in to download  
the printable version of this worksheet.

How many **blue** s are there? \_\_\_\_\_

How many **orange** s are there? \_\_\_\_\_

How many s are there in all? \_\_\_\_\_