



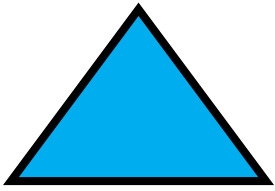
Name: \_\_\_\_\_

**K-76**

Identifying  
Basic Shapes

## Daily Word Problem

Circle all the triangles.



How many sides  
does a triangle have? \_\_\_\_\_

Name: \_\_\_\_\_

**K-77**

Counting By  
Ones

## Daily Word Problem

Count by ones.

Fill in the number that comes next.

4 5 6



7, \_\_\_\_\_, 9, \_\_\_\_\_







Name: \_\_\_\_\_

**K-78**

Addition to 10

## Daily Word Problem

I see



at the zoo.



# Preview

Please log in to download  
the printable version of this worksheet.

How many s are  
at the zoo now?

\_\_\_\_\_


\_\_\_\_\_ + \_\_\_\_\_ = \_\_\_\_\_

Name: \_\_\_\_\_

**K-79**

Addition to 10

## Daily Word Problem



# Preview

Please log in to download  
the printable version of this worksheet.

How many **green** s are there? \_\_\_\_\_

How many **blue** s are there? \_\_\_\_\_


How many s are there in all? \_\_\_\_\_

Name: \_\_\_\_\_

**K-80**

Comparing  
(Fewest/Most)

## Daily Word Problem



# Preview

Please log in to download  
the printable version of this worksheet.

How many



s?

\_\_\_\_\_

Are there more



s or



s?

Circle the correct answer.