
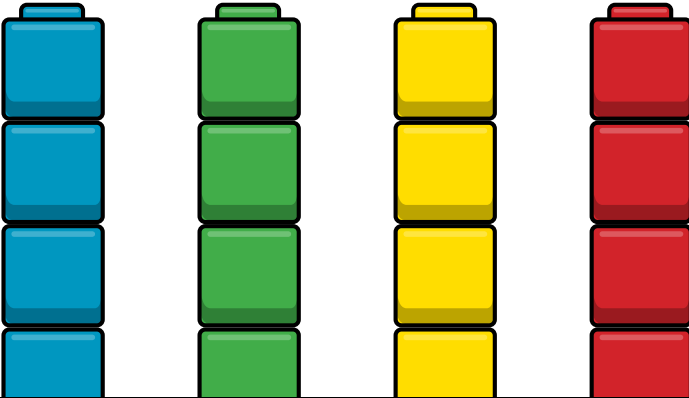


Name: _____

K-86

Skip Counting
by 10s

Daily Word Problem



Each stack has 10 cubes.

How many cubes are there? _____

Name: _____

K-87

Counting By
Ones

Daily Word Problem

Count by ones.

Fill in the number that comes next.

3 4 5



_____, **8, 9,** _____




Name: _____

K-88



Identifying
Basic Shapes

Daily Word Problem

Circle all the rectangles.



Preview
Please log in to download
the printable version of this worksheet.




How many sides does
a rectangle have? _____

Name: _____

K-89

Addition to 10

Daily Word Problem



Preview

Please log in to download
the printable version of this worksheet.

How many **blue** s are there? _____

How many **red** s are there? _____

How many s are there in all? _____

Name: _____

K-90

Largest &
Smallest Value

Daily Word Problem

7

8

6



Preview

Please log in to download
the printable version of this worksheet.

Which number has
the largest value?

Which number has
the smallest value?
