



Name: _____


Thinking About Decimals



Color **.4** of the image



Color **.04** of the image



Color **.44** of the image

Compare using $<$, $>$, and $=$.



Preview

Please log in to download
the printable version of this worksheet.



Color **.9** of the image



Color **.99** of the image



Color **.09** of the image

Write the numbers **0.9**, **0.99**, and **.09** in order from least to greatest.

_____, _____, _____.


Jay estimates that a baseball weighs about .5 pounds. Shawna estimates that a baseball weighs about .05 pounds.

Whose estimate is probably closest to the actual weight of the baseball? _____


Explain your answer: _____

ANSWER KEY


Thinking About Decimals



Color **.4** of the image



Color **.04** of the image



Color **.44** of the image

Compare using $<$, $>$, and $=$.

$$.04 < .4$$

$$.40 = .4$$

$$.4 > .04$$

Preview

Please log in to download the printable version of this worksheet.



to **.5** pounds.