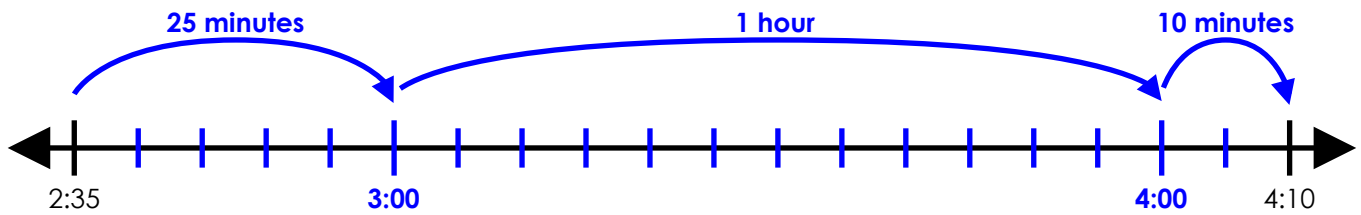


Name: _____

Elapsed Time Number Line

Start Time	End Time
2:35 pm	4:10 pm



elapsed time: 1 hour and 35 minutes



~ PREVIEW ~

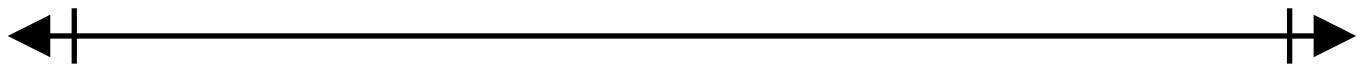
Please log in or register to download the printable version of this worksheet.



elapsed time: _____

b.

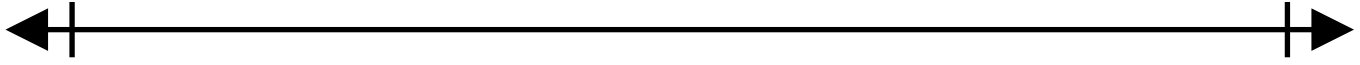
Start Time	End Time
6:15 pm	9:10 pm



elapsed time: _____

c.

Start Time	End Time
7:40 am	10:05 am



elapsed time: _____


d.

Start Time	End Time
10:30 pm	12:15 am



~ PREVIEW ~

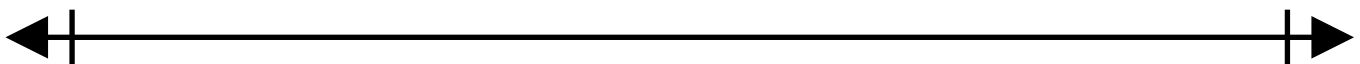
Please log in or register to download the printable version of this worksheet.



elapsed time: _____

★

Start Time	End Time
quarter after 5 pm	10 minutes to 9 pm

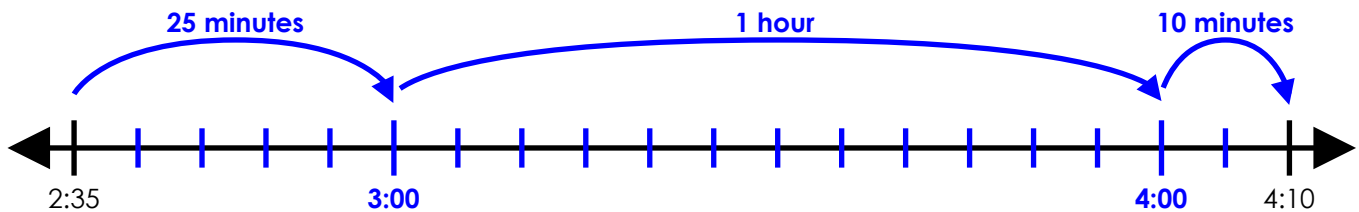


elapsed time: _____

ANSWER KEY

Elapsed Time Number Line

Start Time	End Time
2:35 pm	4:10 pm

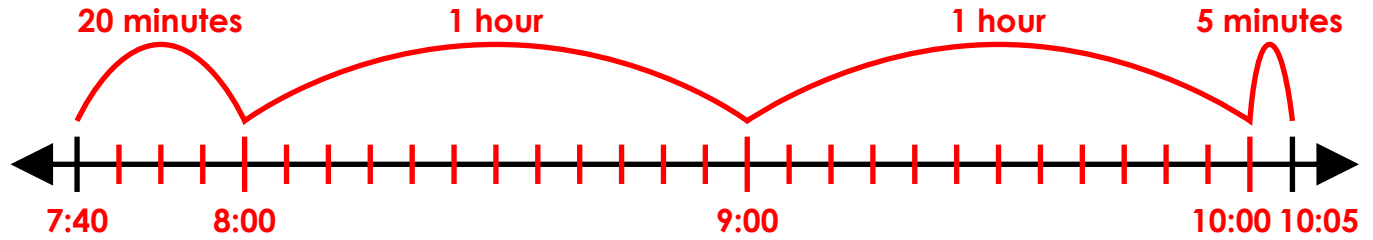


~ PREVIEW ~

Please log in or register to download
the printable version of this worksheet.

c.

Start Time	End Time
7:40 am	10:05 am



elapsed time: 2 hours and 25 minutes

d.

Start Time	End Time
10:30 pm	12:15 am

20 minutes 1 hour 15 minutes



~ PREVIEW ~

Please log in or register to download
the printable version of this worksheet.

elapsed time: 2 hours and 25 minutes