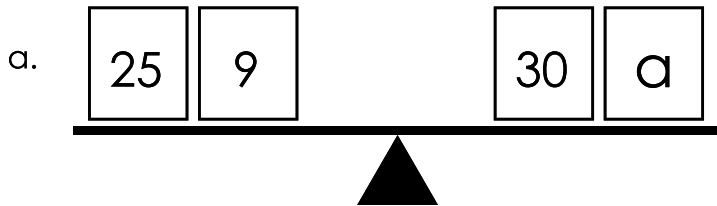


Balance the Scales

Make the scales balance by using addition and subtraction to find the values of the variables.

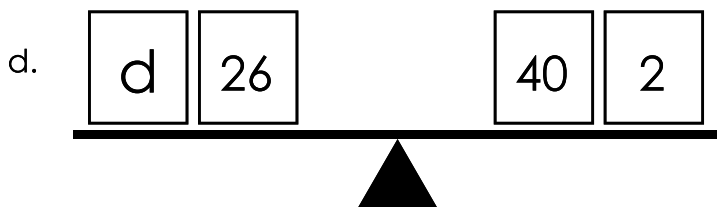


$$\underline{\quad} + \underline{\quad} = \underline{\quad} + \underline{\quad}$$

$$a = \underline{\quad}$$

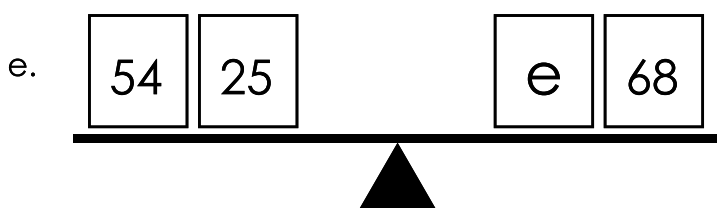


$$\underline{\quad} + \underline{\quad} = \underline{\quad} + \underline{\quad}$$



$$\underline{\quad} + \underline{\quad} = \underline{\quad} + \underline{\quad}$$

$$d = \underline{\quad}$$

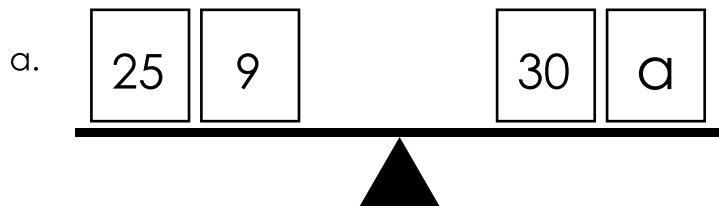


$$\underline{\quad} + \underline{\quad} = \underline{\quad} + \underline{\quad}$$

$$e = \underline{\quad}$$

Balance the Scales

Make the scales balance by using addition and subtraction to find the values of the variables.



$$\underline{25} + \underline{9} = \underline{30} + \underline{a}$$

$$a = \underline{4}$$

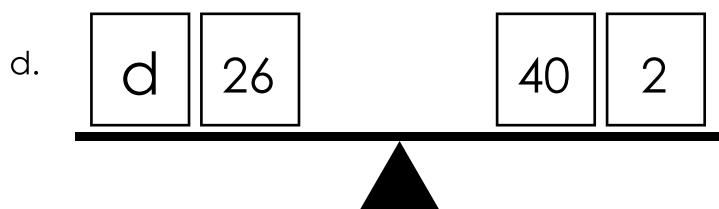


$$\underline{b} + \underline{17} = \underline{20} + \underline{7}$$



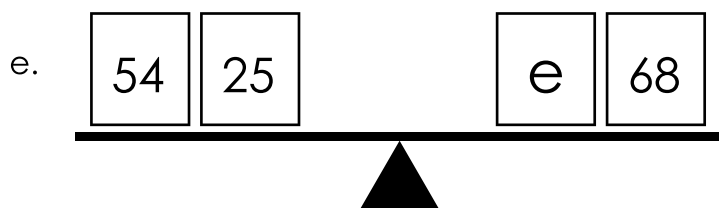
Preview

Please log in to download the printable version of this worksheet.



$$\underline{d} + \underline{26} = \underline{40} + \underline{2}$$

$$d = \underline{16}$$



$$\underline{54} + \underline{25} = \underline{e} + \underline{68}$$

$$e = \underline{11}$$