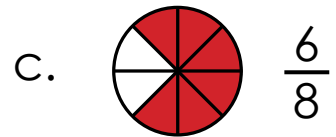
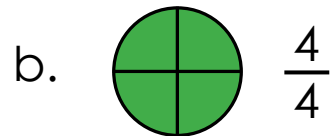
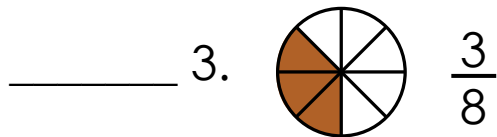
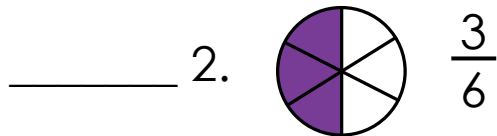
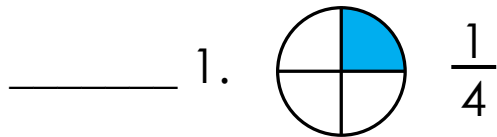


Name: _____

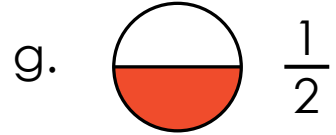
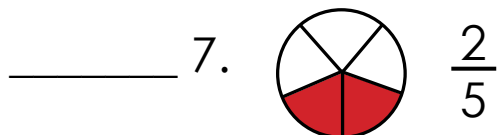
Equivalent Fractions

Match the fractions on the left with equivalent fractions on the right.
Write the correct letters on the lines.

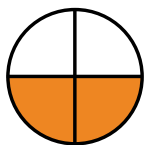


Preview

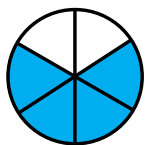
Please log in to download
the printable version of this worksheet.



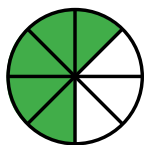
Circle the three fractions below that are equal.



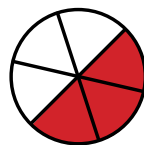
$\frac{2}{4}$



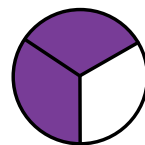
$\frac{4}{6}$



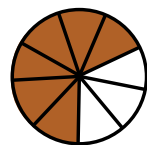
$\frac{5}{8}$



$\frac{3}{6}$



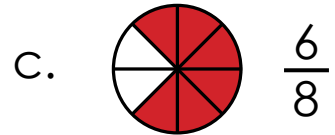
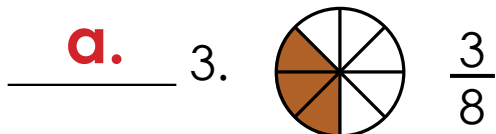
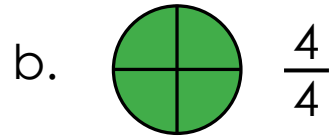
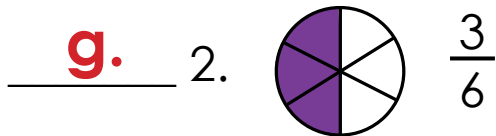
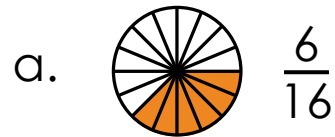
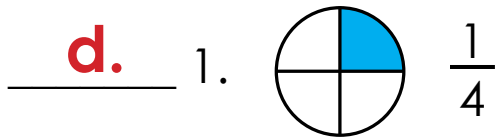
$\frac{2}{3}$



$\frac{6}{9}$

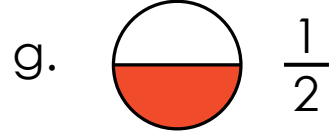
Equivalent Fractions

Match the fractions on the left with equivalent fractions on the right. Write the correct letters on the lines.

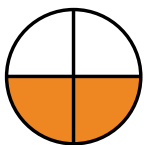


Preview

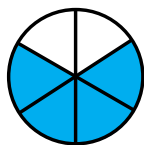
Please log in to download the printable version of this worksheet.



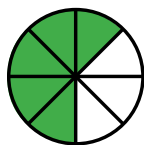
Circle the three fractions below that are equal.



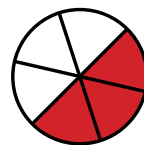
$\frac{2}{4}$



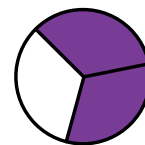
$\frac{4}{6}$



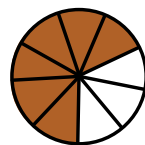
$\frac{5}{8}$



$\frac{3}{6}$



$\frac{2}{3}$



$\frac{6}{9}$