
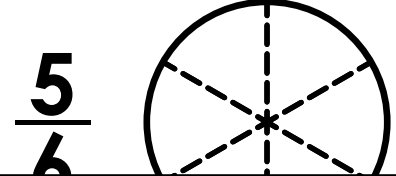
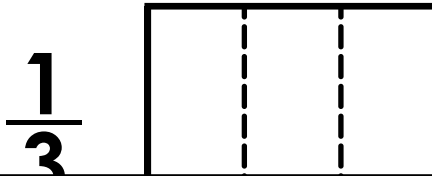
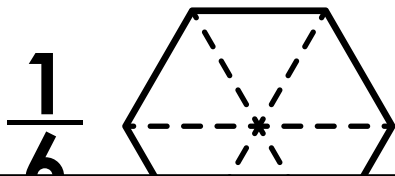
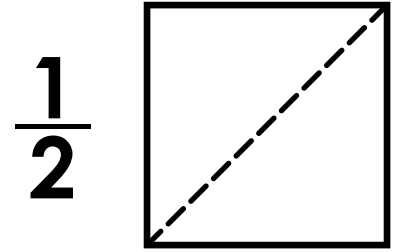
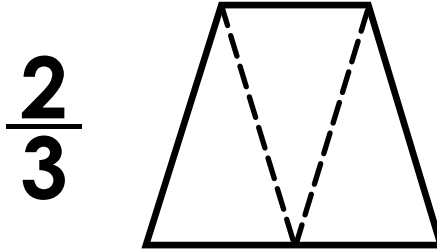
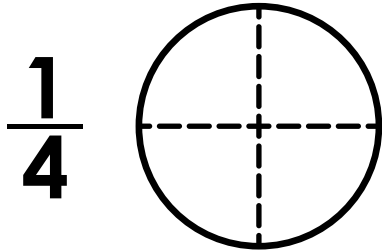


Name: \_\_\_\_\_

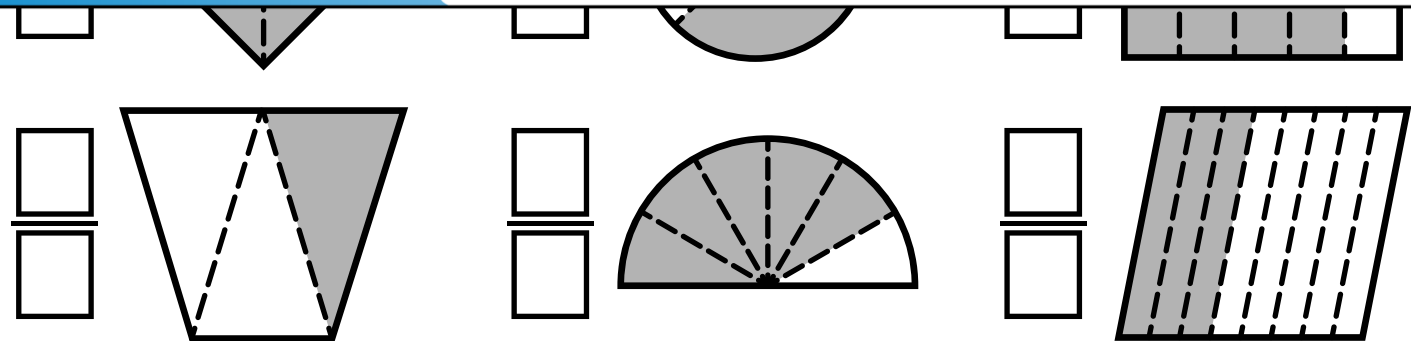
# Fractions of Shapes

Shade each figure to show the fraction given.



# Preview


Please log in to download the printable version of this worksheet.



Divide the square into four equal parts.  
Shade 3 parts.

What fraction of the square is shaded?

\_\_\_\_\_

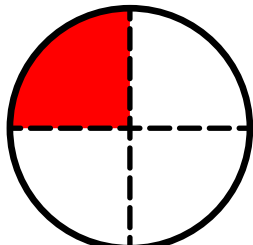


# ANSWER KEY

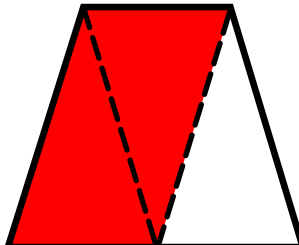
## Fractions of Shapes

Shade each figure to show the fraction given.

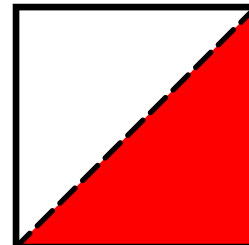
$\frac{1}{4}$



$\frac{2}{3}$



$\frac{1}{2}$



$\frac{1}{6}$

Tell

# Preview

Please log in to download the printable version of this worksheet.

2

4

1

3

Divide the square into four equal parts.  
Shade 3 parts.

What fraction of the square is shaded?

$\frac{3}{4}$

