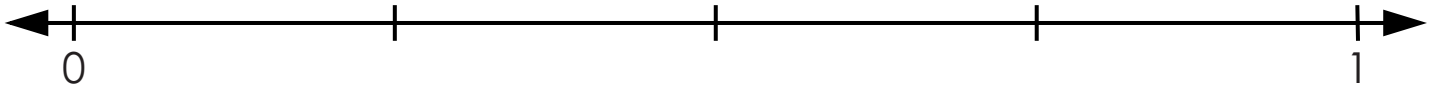


Name: _____

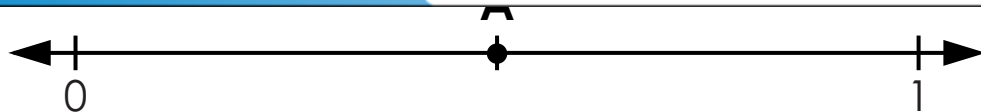
Fractions on Number Lines

1. Label $\frac{1}{4}$, $\frac{2}{4}$, and $\frac{3}{4}$ on the number line below.

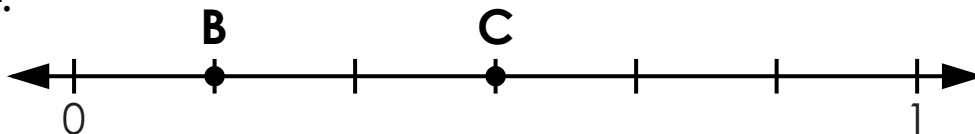


2. Label $\frac{1}{8}$, $\frac{2}{8}$, $\frac{3}{8}$, $\frac{4}{8}$, $\frac{5}{8}$, $\frac{6}{8}$, and $\frac{7}{8}$ on the number line below.

Preview
Please log in to download the printable version of this worksheet.



4.

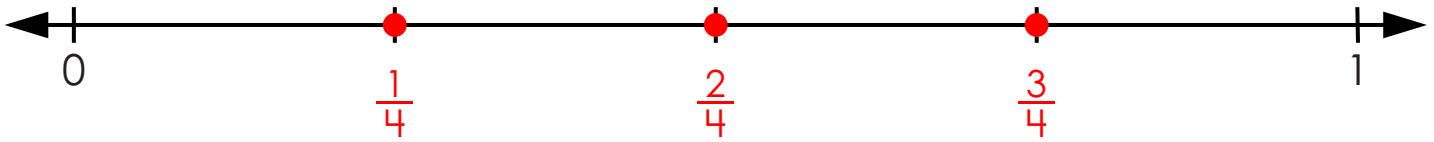


Point **B** is:

Point **C** is:

Fractions on Number Lines

1. Label $\frac{1}{4}$, $\frac{2}{4}$, and $\frac{3}{4}$ on the number line below.



6

6