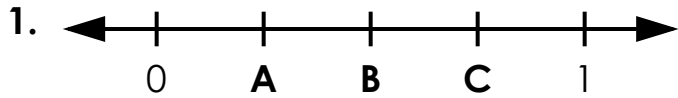


Name: \_\_\_\_\_

# Number Lines

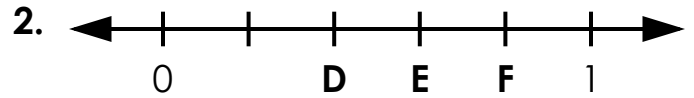
Write the fraction or mixed number represented by the letters on the number lines.



A = \_\_\_\_\_

B = \_\_\_\_\_

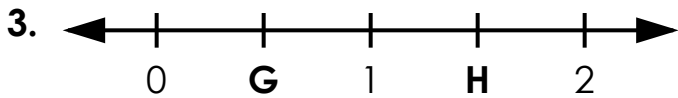
C = \_\_\_\_\_



D = \_\_\_\_\_

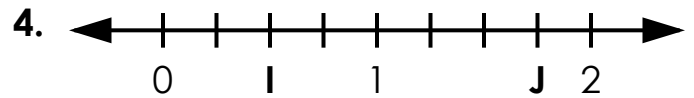
E = \_\_\_\_\_

F = \_\_\_\_\_



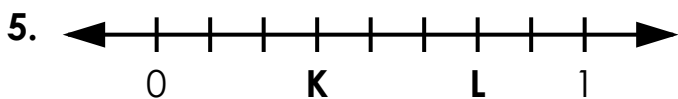
G = \_\_\_\_\_

H = \_\_\_\_\_



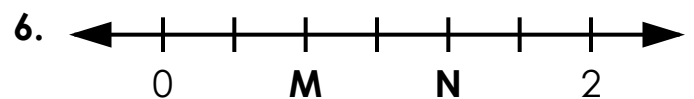
I = \_\_\_\_\_

J = \_\_\_\_\_



K = \_\_\_\_\_

L = \_\_\_\_\_



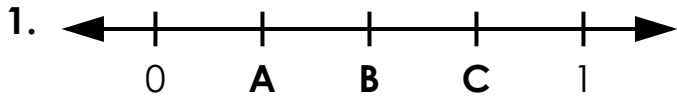
M = \_\_\_\_\_

N = \_\_\_\_\_

# ANSWER KEY

## Number Lines

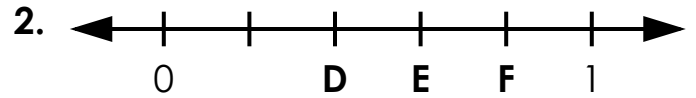
Write the fraction or mixed number represented by the letters on the number lines.



$$A = \frac{1}{4}$$

$$B = \frac{2}{4} \text{ or } \frac{1}{2}$$

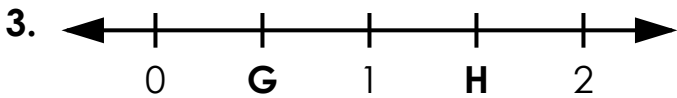
$$C = \frac{3}{4}$$



$$D = \frac{2}{5}$$

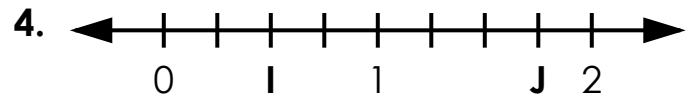
$$E = \frac{3}{5}$$

$$F = \frac{4}{5}$$



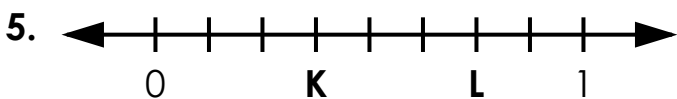
$$G = \frac{1}{2}$$

$$H = 1 \frac{1}{2}$$



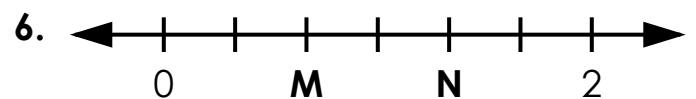
$$I = \frac{2}{4} \text{ or } \frac{1}{2}$$

$$J = 1 \frac{3}{4}$$



$$K = \frac{3}{8}$$

$$L = \frac{6}{8} \text{ or } \frac{3}{4}$$



$$M = \frac{2}{3}$$

$$N = 1 \frac{1}{3}$$