

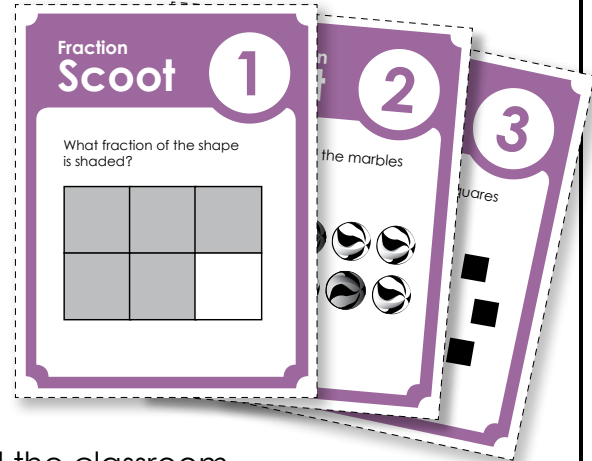
Fraction Scoot

Objective: This game will give students an opportunity to review basic fractions.

Materials: Grid Worksheet (one per student)
Scoot Question Cards (one per desk)

Preparation: Place a Scoot Question Card on each desk. Attach them to the desk with tape.

How to Play: Students will move from desk to desk around the classroom. At each desk, students will read question card and write the answer on the grid worksheet. When the teacher says "SCOOT," they move to the next desk. Students visit each desk in the classroom and answer all of the question cards.



Preview

Please log in to download the printable version of this worksheet.

Management Suggestions:

Practice moving from desk to desk before playing the actual game. Have them "Scoot" four or five times before you begin the actual game.

Some teachers like to spread out the desks a bit so students do not look at the cards to the right or left of them before they arrive at the desks.

Watch your timing. If you tell the students to scoot too soon, they may not be able to finish writing answers to their question cards. If you wait too long before telling students to scoot, they may get bored and restless.

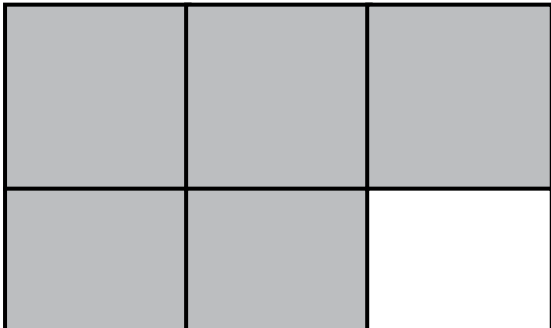
Use only as many question cards as you need. This version of the game has 30 cards. However, if you have only 18 desks in your classroom, only use 18 cards and 18 squares on the grid.

(This file has 20, 25, and 30 square grids. Use whichever one best meets your needs.)

Fraction Scoot

1

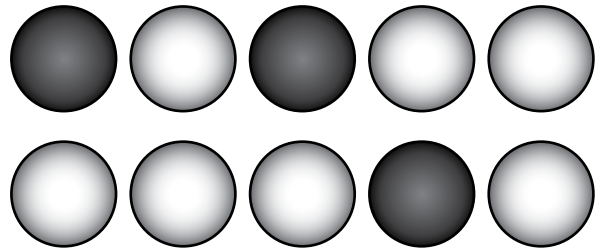
What fraction of the shape is shaded?



Fraction Scoot

2


What fraction of the marbles are black?




Preview

Please log in to download the printable version of this worksheet.

What fraction of the squares are inside the circle?



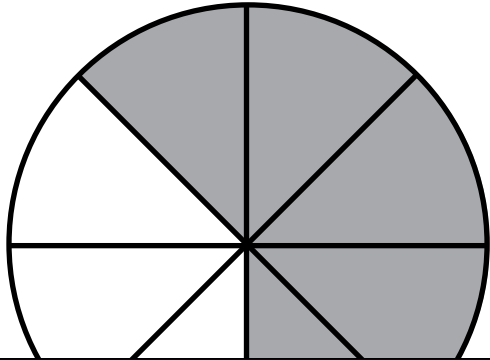
What fraction of the vases have a flower in them?



Fraction Scoot

5


What fraction of the shape is shaded?



Fraction Scoot

6

What fraction of the animals are cats?



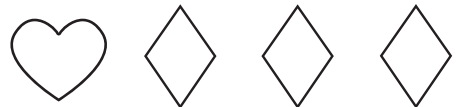
Preview

Please log in to download the printable version of this worksheet.

What fraction of the stars are outside of the square?



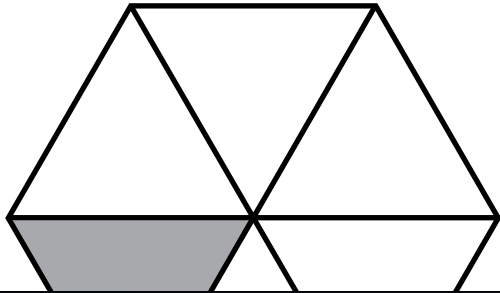
What fraction of the shapes are white?



Fraction Scoot

9


What fraction of the shape is shaded?



Fraction Scoot

10

What fraction of the faces are smiling?




Preview

Please log in to download the printable version of this worksheet.

SCOOT

11


What fraction of the letters are above the line?



SCOOT

12

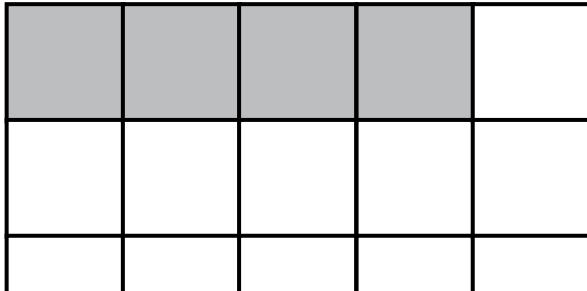
What fraction of the monsters have arms?



Fraction Scoot

13


What fraction of the shape is shaded?



Fraction Scoot

14

What fraction of the footprints are black?




Preview

Please log in to download the printable version of this worksheet.

Fraction Scoot

15

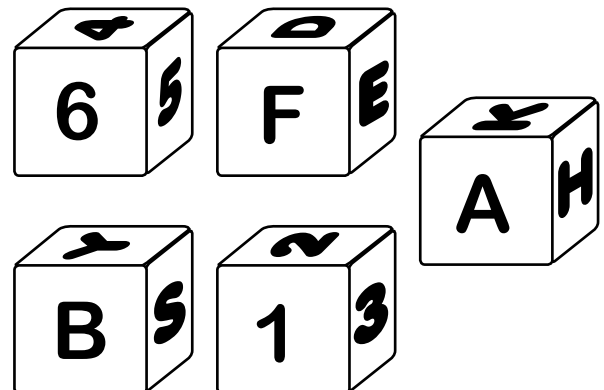
What fraction of the **X**s are to the right of the line?



Fraction Scoot

16

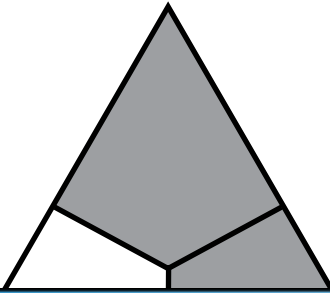
What fraction of the dice have numbers?



Fraction Scoot

17


What fraction of the shape is shaded?



Fraction Scoot

18

What fraction of the crayons are broken?



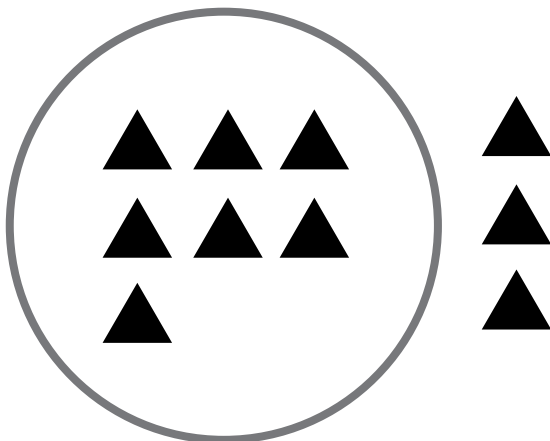
Preview

Please log in to download the printable version of this worksheet.

Fraction Scoot

19


What fraction of the triangles are inside the circle?



Fraction Scoot

20

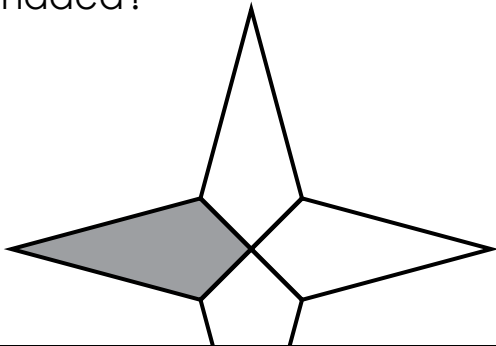
What fraction of the mice have tails?



Fraction Scoot

21

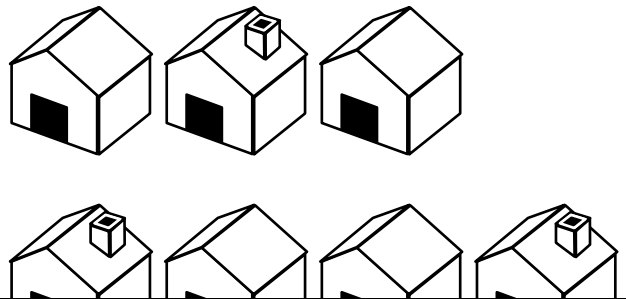
What fraction of the shape is shaded?



Fraction Scoot

22

What fraction of the houses are have a chimney?

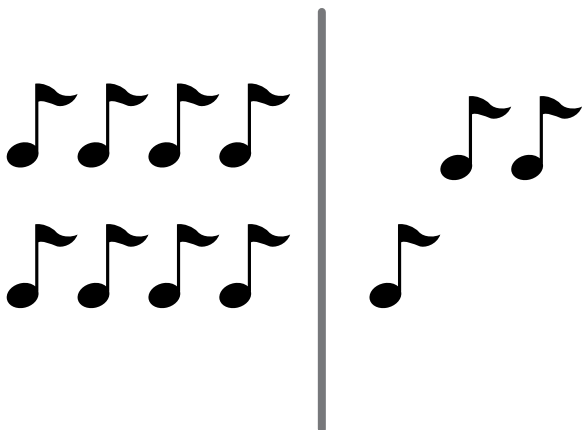


Preview

Please log in to download the printable version of this worksheet.


23

What fraction of the music notes are on the left of the line?



24

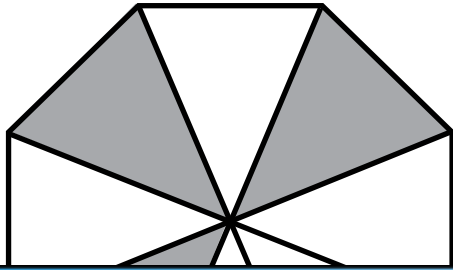
What fraction of the vehicles are trucks?



Fraction Scoot

25


What fraction of the shape is shaded?



Fraction Scoot

26

What fraction of the apples have been eaten?




Preview

Please log in to download the printable version of this worksheet.

SCOOT

27


What fraction of the circles are inside the triangle?



SCOOT

28


What fraction of the pigs are spotted?



Fraction Scoot

29

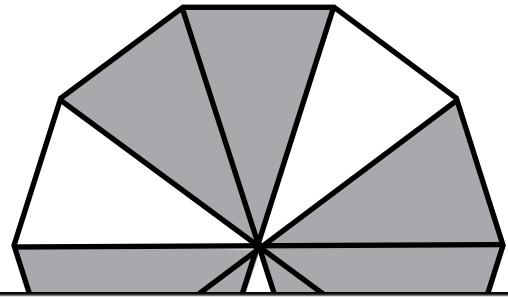
What fraction of the 😊s are to the left of the line?



Fraction Scoot

30

What fraction of the shape is shaded?



Preview

Please log in to download the printable version of this worksheet.

Name: _____

Fraction Scoot

Answer Grid:
20 Squares

| | | | | |
|---|---|---|---|---|
| ① | ② | ③ | ④ | ⑤ |
| ⑥ | ⑦ | ⑧ | ⑨ | ⑩ |

A cartoon superhero with brown hair, wearing a blue suit and a red cape, is flying to the right. He has a friendly expression. On his chest is a blue shield with the letters 'M.T.S.' written on it in white.

Preview
Please log in to download
the printable version of this worksheet.

| | | | | |
|---|---|---|---|---|
| ⑪ | ⑫ | ⑬ | ⑭ | ⑮ |
| ⑯ | ⑰ | ⑱ | ⑲ | ⑳ |

Name: _____

Fraction Scoot

Answer Grid:
25 Squares

| | | | | |
|---|---|---|---|---|
| ① | ② | ③ | ④ | ⑤ |
| ⑥ | ⑦ | ⑧ | ⑨ | ⑩ |



Preview
Please log in to download
the printable version of this worksheet.

| | | | | |
|---|---|---|---|---|
| ⑪ | ⑫ | ⑬ | ⑭ | ⑮ |
| ⑯ | ⑰ | ⑱ | ⑲ | ⑳ |

Name: _____

Fraction Scoot

Answer Grid:
30 Squares

| | | | | |
|---|---|---|---|---|
| ① | ② | ③ | ④ | ⑤ |
| ⑥ | ⑦ | ⑧ | ⑨ | ⑩ |
| ⑪ | ⑫ | ⑬ | ⑭ | ⑮ |



Preview
Please log in to download
the printable version of this worksheet.

| | | | | |
|---|---|---|---|---|
| ⑰ | ⑱ | ⑲ | ⑳ | ㉑ |
| ㉒ | ㉓ | ㉔ | ㉕ | ㉖ |

Fraction Scoot

Answer
Sheet

①

$$\frac{5}{6}$$

②

$$\frac{3}{10}$$

③

$$\frac{4}{7}$$

④

$$\frac{2}{3}$$

⑤

$$\frac{5}{8}$$

⑥

$$\frac{1}{4}$$

⑦

$$\frac{1}{10}$$

⑧

$$\frac{4}{9}$$

⑨

$$\frac{1}{6}$$

⑩

$$\frac{3}{10}$$

⑪

⑫

⑬

⑭

⑮



Preview

Please log in to download
the printable version of this worksheet.

⑲

$$\frac{1}{4}$$

⑳

$$\frac{3}{7}$$

㉑

$$\frac{8}{11}$$

㉒

$$\frac{1}{7}$$

㉓

$$\frac{3}{8}$$

㉔

$$\frac{3}{5}$$

㉕

$$\frac{9}{14}$$

㉖

$$\frac{3}{4}$$

㉗

$$\frac{4}{11}$$

㉘

$$\frac{7}{10}$$