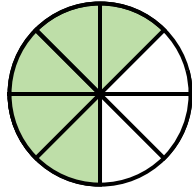
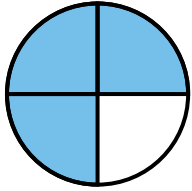


1. Comparing Fractions

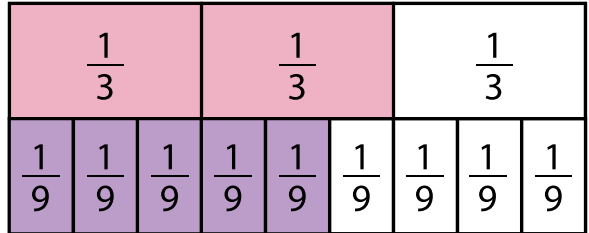


$$\frac{3}{4}$$




$$\frac{5}{8}$$

2. Comparing Fractions



$$\frac{5}{9}$$

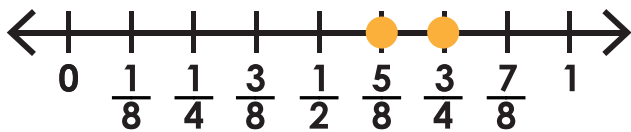


$$\frac{2}{3}$$



Preview

Please log in to download the printable version of this worksheet.

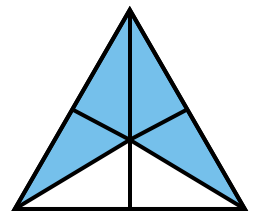
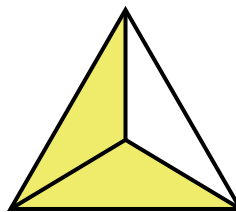


$$\frac{5}{8}$$



$$\frac{3}{4}$$

Write out the fractions and the symbol on your answer sheet.



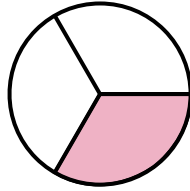
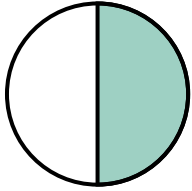
$$\frac{2}{3}$$



$$\frac{4}{6}$$

Write out the fractions and the symbol on your answer sheet.

5. Comparing Fractions

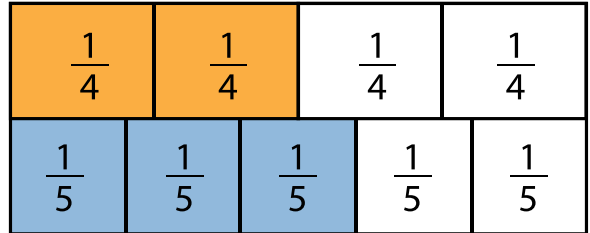


$$\frac{1}{2}$$



$$\frac{1}{3}$$

6. Comparing Fractions



$$\frac{3}{5}$$

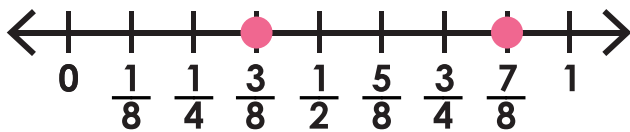


$$\frac{2}{4}$$



Preview

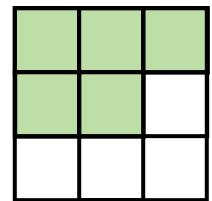
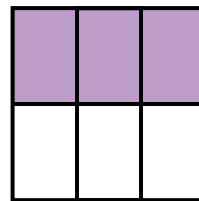
Please log in to download the printable version of this worksheet.



$$\frac{7}{8}$$



$$\frac{3}{8}$$



$$\frac{3}{6}$$

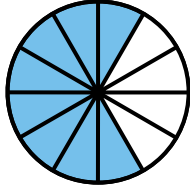
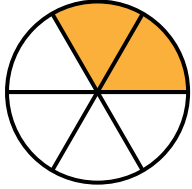


$$\frac{5}{9}$$

Write out the fractions and the symbol on your answer sheet.

Write out the fractions and the symbol on your answer sheet.

9. Comparing Fractions



$$\frac{2}{6}$$



$$\frac{8}{12}$$

10. Comparing Fractions

$\frac{1}{10}$	$\frac{1}{10}$	$\frac{1}{10}$	$\frac{1}{10}$	$\frac{1}{10}$	$\frac{1}{10}$	$\frac{1}{10}$	$\frac{1}{10}$	$\frac{1}{10}$	$\frac{1}{10}$
$\frac{1}{5}$	$\frac{1}{5}$	$\frac{1}{5}$	$\frac{1}{5}$	$\frac{1}{5}$	$\frac{1}{5}$	$\frac{1}{5}$	$\frac{1}{5}$	$\frac{1}{5}$	$\frac{1}{5}$

$$\frac{6}{10}$$

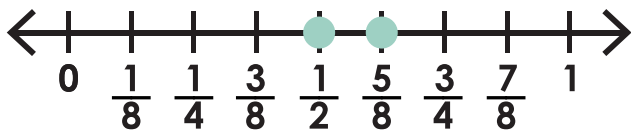


$$\frac{3}{5}$$



Preview

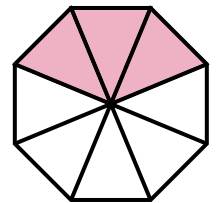
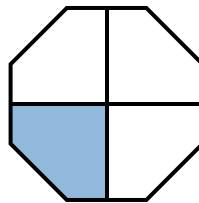
Please log in to download the printable version of this worksheet.



$$\frac{1}{2}$$



$$\frac{5}{8}$$



$$\frac{1}{4}$$

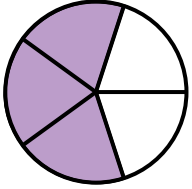


$$\frac{3}{8}$$

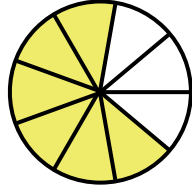
Write out the fractions and the symbol on your answer sheet.

Write out the fractions and the symbol on your answer sheet.

13. Comparing Fractions

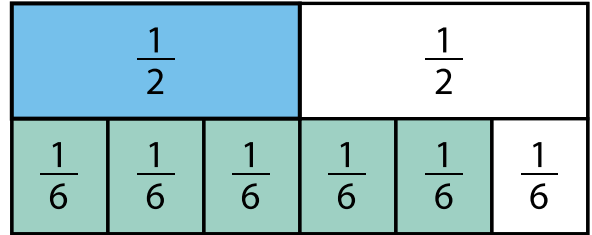


$$\frac{3}{5}$$



$$\frac{6}{9}$$

14. Comparing Fractions



$$\frac{1}{2}$$

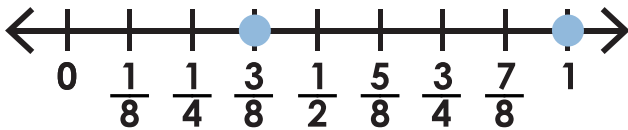


$$\frac{5}{6}$$



Preview

Please log in to download the printable version of this worksheet.

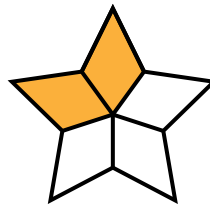


$$1$$



$$\frac{3}{8}$$


Write out the fractions and the symbol on your answer sheet.



$$\frac{2}{5}$$

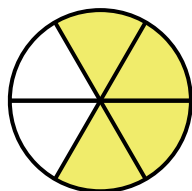
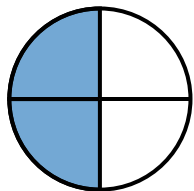


$$\frac{6}{10}$$



Write out the fractions and the symbol on your answer sheet.

17. Comparing Fractions

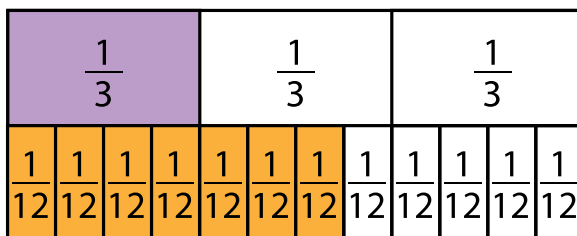


$$\frac{2}{4}$$




$$\frac{4}{6}$$

18. Comparing Fractions



$$\frac{7}{12}$$

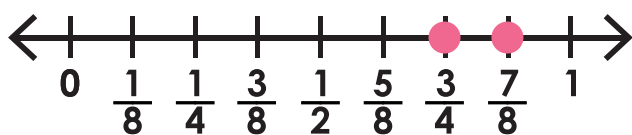


$$\frac{1}{3}$$



Preview


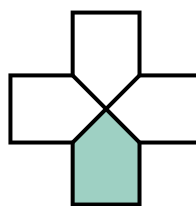
Please log in to download the printable version of this worksheet.




$$\frac{7}{8}$$



$$\frac{3}{4}$$



$$\frac{1}{4}$$

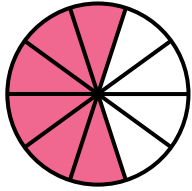


$$\frac{7}{8}$$

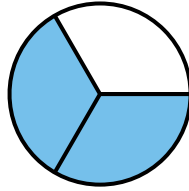
Write out the fractions and the symbol on your answer sheet.

Write out the fractions and the symbol on your answer sheet.

21. Comparing Fractions

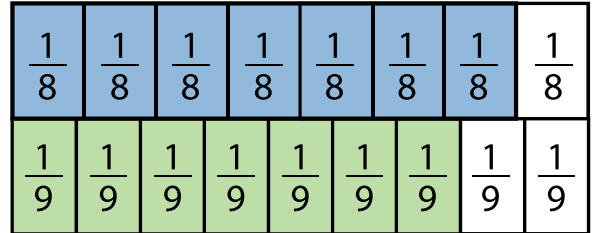


$$\frac{6}{10}$$



$$\frac{2}{3}$$

22. Comparing Fractions



$$\frac{7}{9}$$

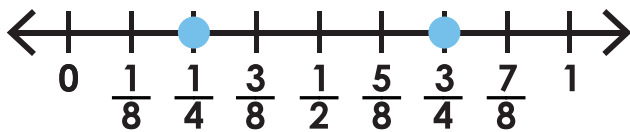


$$\frac{7}{8}$$



Preview

Please log in to download the printable version of this worksheet.

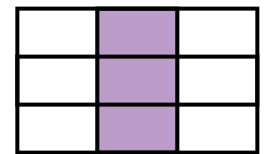
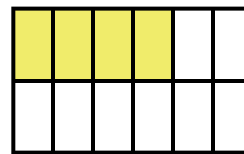


$$\frac{3}{4}$$



$$\frac{1}{4}$$

Write out the fractions and the symbol on your answer sheet.



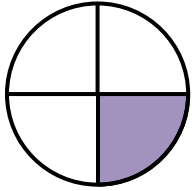
$$\frac{4}{12}$$



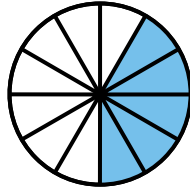
$$\frac{3}{9}$$

Write out the fractions and the symbol on your answer sheet.

25. Comparing Fractions

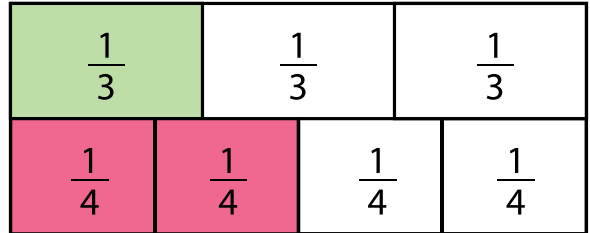


$$\frac{1}{4}$$



$$\frac{5}{12}$$

26. Comparing Fractions



$$\frac{2}{4}$$

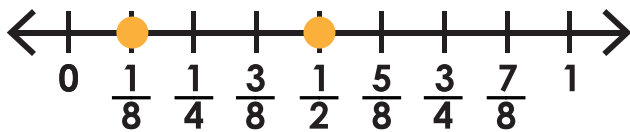


$$\frac{1}{3}$$



Preview

Please log in to download the printable version of this worksheet.

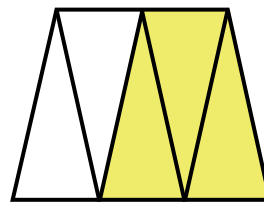


$$\frac{1}{8}$$




$$\frac{1}{2}$$

Write out the fractions and the symbol on your answer sheet.



$$\frac{3}{5}$$



$$\frac{1}{2}$$

Write out the fractions and the symbol on your answer sheet.

Name: _____

Task Cards: Comparing Fractions

1.

2.

3.

4.

5.

Preview

Please log in to download
the printable version of this worksheet.



26.

27.

28.

ANSWER KEY

Task Cards: Comparing Fractions

1. $\frac{3}{4} > \frac{5}{8}$	2. $\frac{5}{9} < \frac{2}{3}$	3. $\frac{5}{8} < \frac{3}{4}$	4. $\frac{2}{3} = \frac{4}{6}$	5. $\frac{1}{2} > \frac{1}{3}$
-----------------------------------	-----------------------------------	-----------------------------------	-----------------------------------	-----------------------------------

Preview

Please log in to download
the printable version of this worksheet.



26. $\frac{2}{4} > \frac{1}{3}$	27. $\frac{1}{8} < \frac{1}{2}$	28. $\frac{3}{5} > \frac{1}{2}$		
------------------------------------	------------------------------------	------------------------------------	--	--

Task Cards: Comparing Fractions

This file contains 28 task cards.

There are countless ways to use task cards in your classroom.
Here are a few ideas:

Preview

Please log in to download
the printable version of this worksheet.



Have a parent, friend, or volunteer sit with individual students who need extra help. They can practice by solving the problems on the task cards together.