


Name: _____


Area of a Circle

Find the area of each circle. Use 3.14 for pi. Show your work.

a.



b.



c.

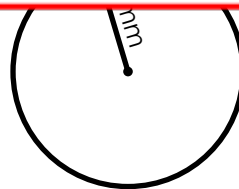
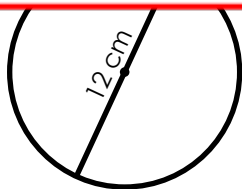


d.

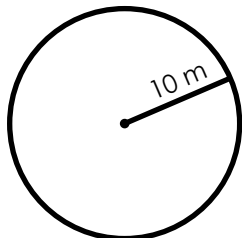


~ PREVIEW ~

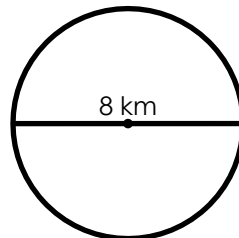
Please log in or register to download the printable version of this worksheet.



g.



h.




ANSWER KEY


Area of a Circle

Find the area of each circle. Use 3.14 for pi. Show your work.

a.



b.



~ PREVIEW ~

Please log in or register to download
the printable version of this worksheet.