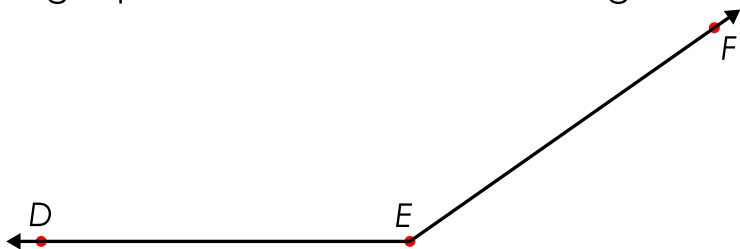


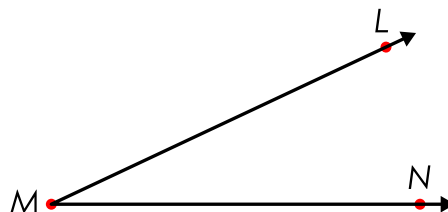
Name: \_\_\_\_\_

## Measuring Angles

Using a protractor, measure the angles.



$\angle DEF =$  \_\_\_\_\_



$\angle LMN =$  \_\_\_\_\_



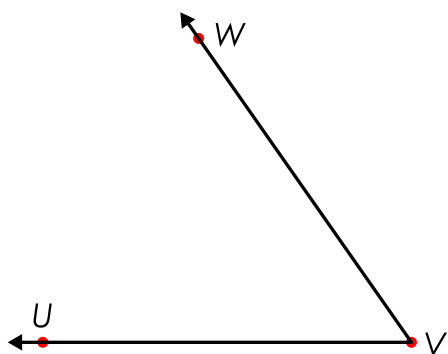
$\angle RST =$  \_\_\_\_\_

$\angle ABC =$  \_\_\_\_\_

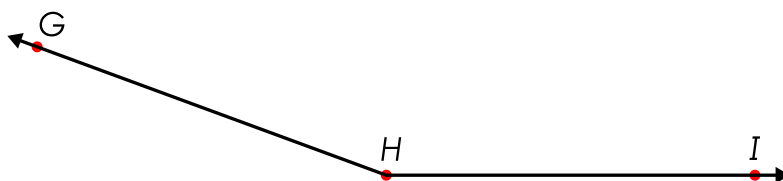


# Preview

Please log in to download the printable version of this worksheet.



$\angle UVW =$  \_\_\_\_\_

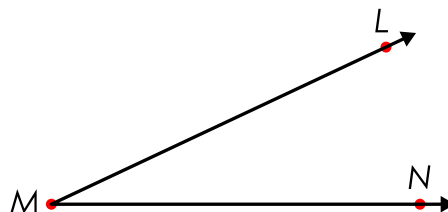
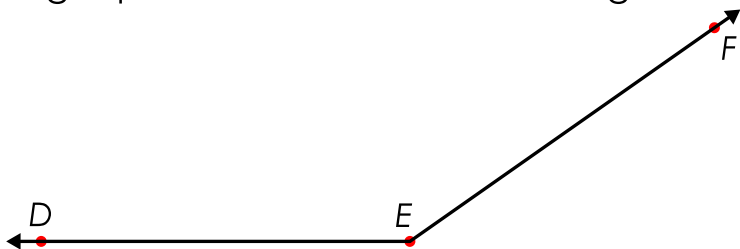


$\angle GHI =$  \_\_\_\_\_

# ANSWER KEY

## Measuring Angles

Using a protractor, measure the angles.



$$\angle DEF = 145^\circ$$

$$\angle LMN = 25^\circ$$



$$\angle UVW = 55^\circ$$

$$\angle GHI = 160^\circ$$