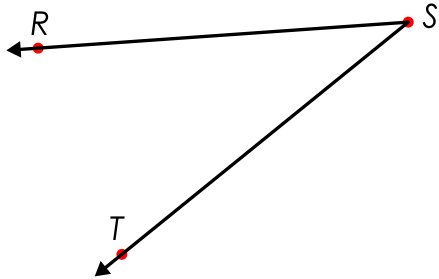


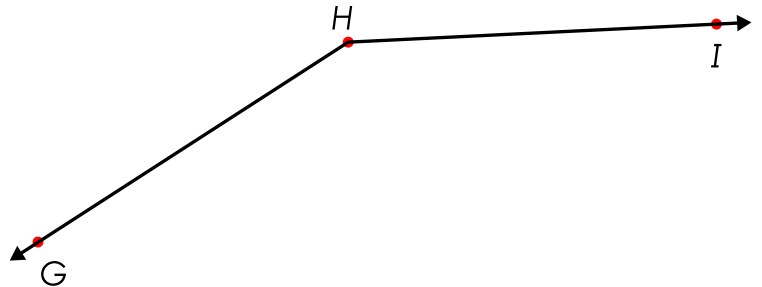
Name: \_\_\_\_\_

## Measuring Angles

Using a protractor, measure the angles.



$\angle RST =$  \_\_\_\_\_



$\angle GHI =$  \_\_\_\_\_

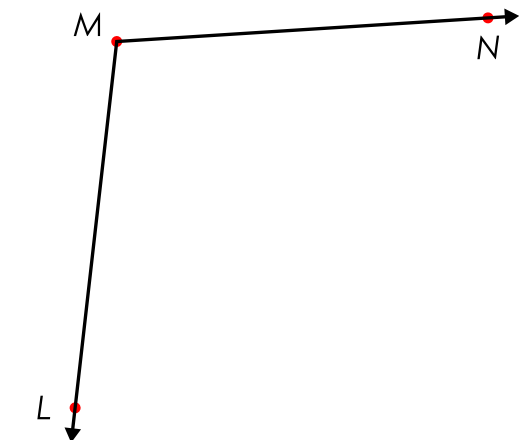


# Preview

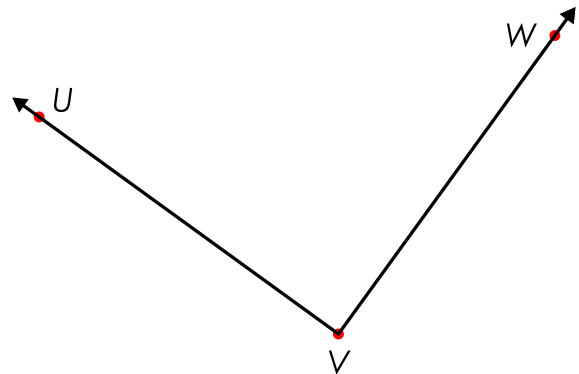
Please log in to download the printable version of this worksheet.

$\angle DEF =$  \_\_\_\_\_

$\angle ABC =$  \_\_\_\_\_



$\angle LMN =$  \_\_\_\_\_

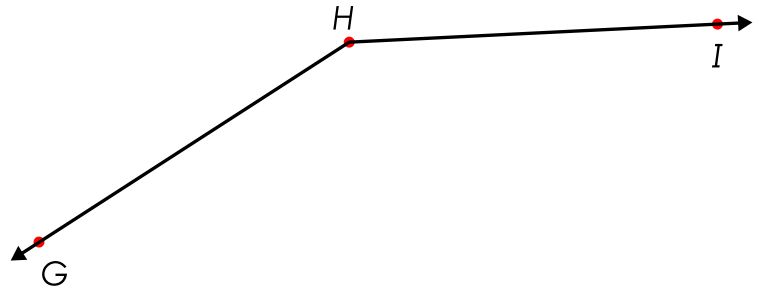
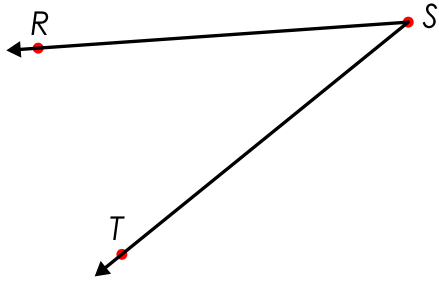


$\angle UVW =$  \_\_\_\_\_

# ANSWER KEY

## Measuring Angles

Using a protractor, measure the angles.



# Preview

Please log in to download the printable version of this worksheet.



$\angle LMN = \underline{100^\circ}$

$\angle UVW = \underline{90^\circ}$