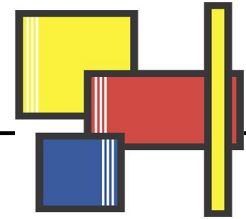


Name: _____

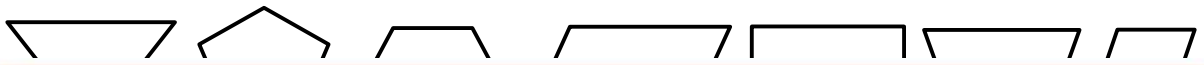


Quadrilateral Questions

1. How many sides does a quadrilateral have? 1. _____
2. How many pairs of parallel sides does a rectangle have? 2. _____
3. How many pairs of parallel sides does a trapezoid have? 3. _____
4. Name two quadrilaterals in which all the sides have an equal length. 4. _____

5. Name two quadrilaterals that have four right angles. 5. _____

6. Color the trapezoid that is next to the rhombus.



7

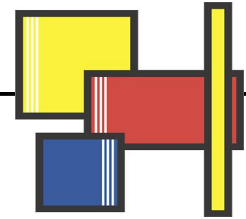


~ PREVIEW ~

Please log in or register to download the printable version of this worksheet.

8. List one way a parallelogram and a rhombus are different.

Quadrilateral Questions



1. How many sides does a quadrilateral have?

1. **4**



~ **PREVIEW** ~

Please log in or register to download
the printable version of this worksheet.