

Name: _____

Quadrilaterals

Match the quadrilateral with its definition.

_____ 1. All sides are the same length.
There are four right angles.

a.



Parallelogram

_____ 2. There is only one pair of parallel sides.

b.



Rectangle

_____ 3. Opposite sides are parallel and the same length. There are four right angles.

c.



Trapezoid

_____ 4. Trapezium



PREVIEW

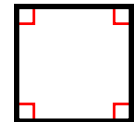
Please log in or register to download the printable version of this worksheet.



Trapezium

_____ 5. There are two pairs of opposite parallel sides.

e.



Square

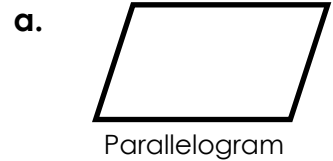
6. List two ways a rectangle and square are alike and one way in which they are different.

ANSWER KEY

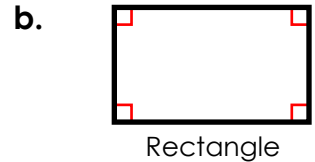
Quadrilaterals

Match the quadrilateral with its definition.

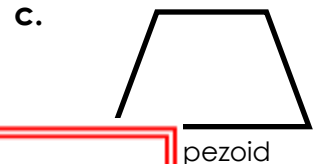
 e 1. All sides are the same length.
There are four right angles.



 c 2. There is only one pair of parallel sides.



 b 3. Opposite sides are parallel and the same length. There are four right angles.

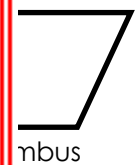


 d 4.

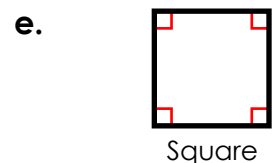


PREVIEW

Please log in or register to download the printable version of this worksheet.



 a 5. There are two pairs of opposite parallel sides.



6. List two ways a rectangle and square are alike and one way in which they are different.

Rectangles and squares are alike in that both have two pairs of parallel sides and four right angles. They are different because a square must have four equal sides lengths and a rectangle has two pairs of equal side lengths.