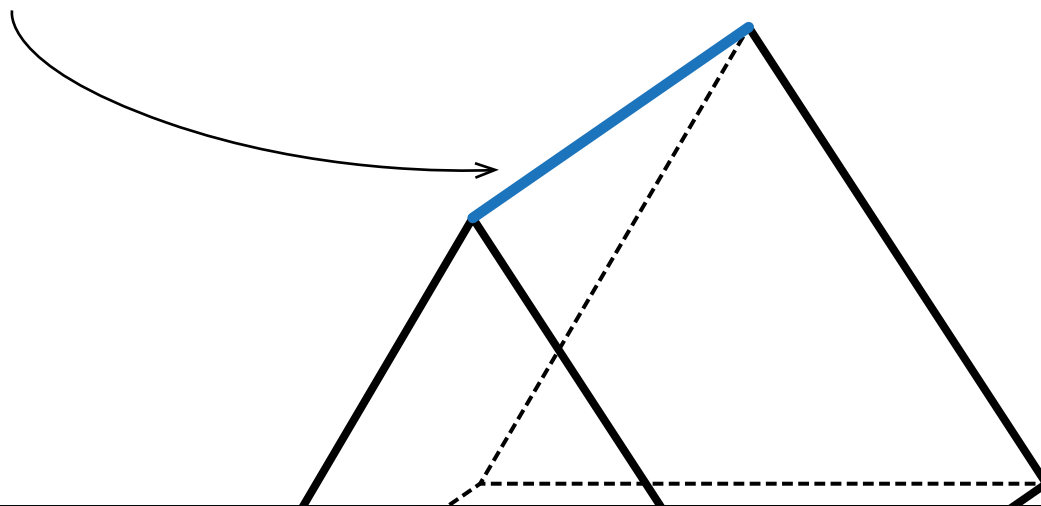


Name: _____

Edges

Edges are the lines where the faces meet.



Preview
Please log in to download the printable version of this worksheet.



1

2

3

4

5

6

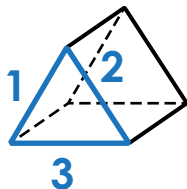
7

8

9

Tips for finding number of edges

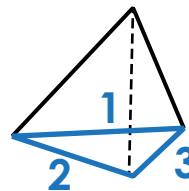
If a prism:



number of edges of the base × multiply by 3

$$3 \times 3 = 9$$

If a pyramid:



number of edges of the base × multiply by 2

$$3 \times 2 = 6$$