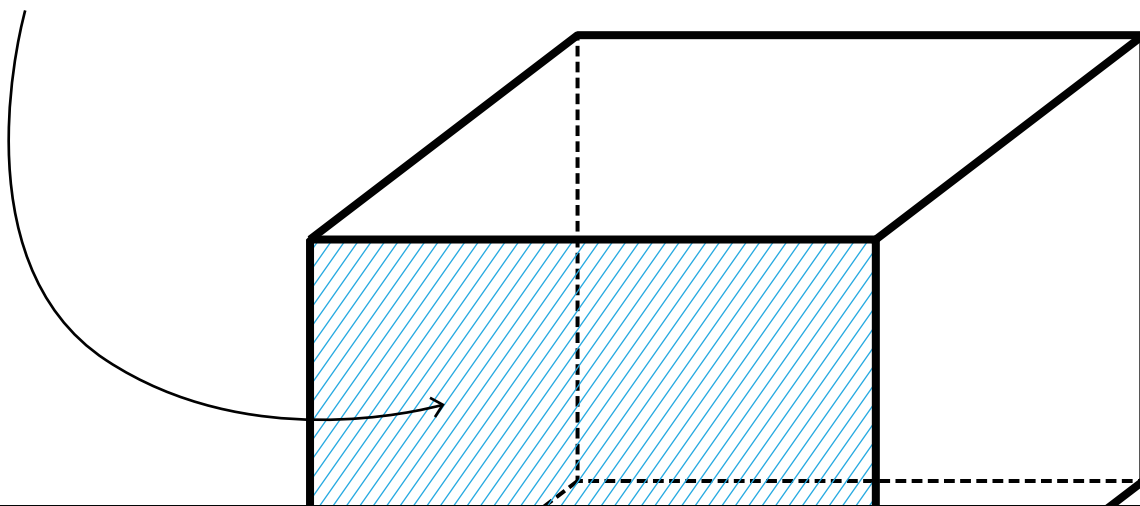


Name: \_\_\_\_\_

# Faces

Faces are the flat surfaces of a shape.



## Preview

Please log in to download the printable version of this worksheet.



1

2

3

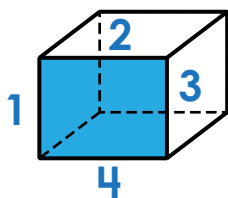
4

5

6

Tips for finding number of faces

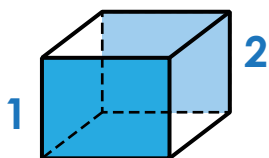
If a prism:



number of sides of the base

4

+



number of bases

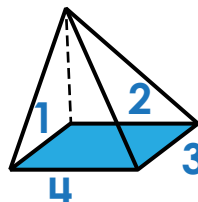
+

2

=

6

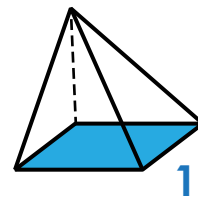
If a pyramid:



number of sides of the base

4

+



number of bases

+

1

=

5