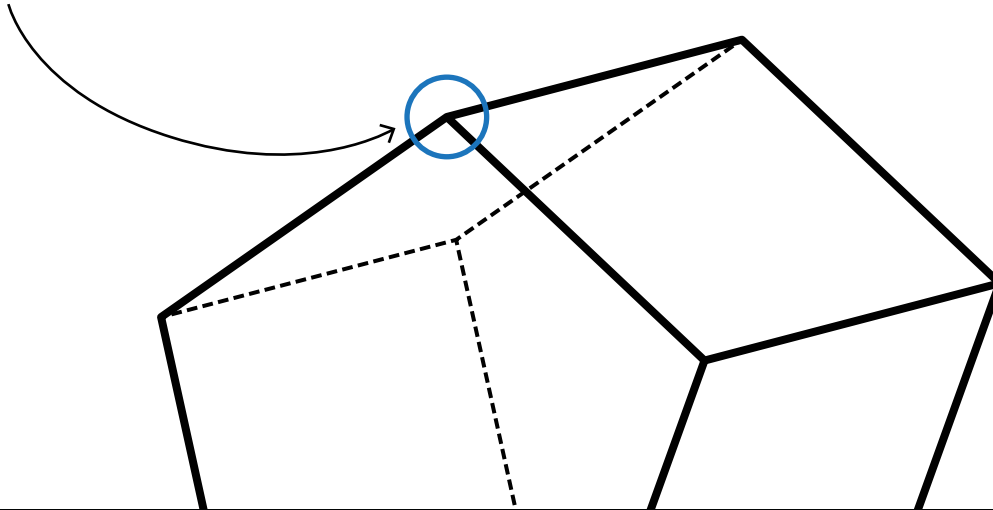


Name: _____

Vertices

Vertices are the points where the edges meet.



Note:
The singular
of vertices
is vertex.



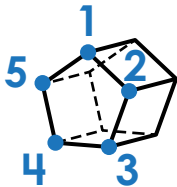
Preview

Please log in to download the printable version of this worksheet.

1 2 3 4 5 6 7 8 9 10

Tips for finding number of vertices

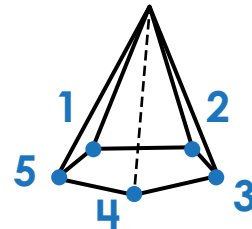
If a prism:



number of points of the base \times multiply by 2

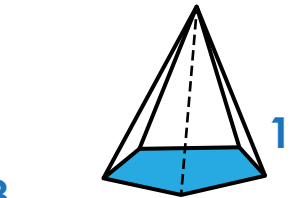
$$5 \times 2 = 10$$

If a pyramid:



number of points of the base

$$5$$



+ add number of base

$$+$$

$$1$$

$$= 6$$