

Name: _____

Solids and Polygons

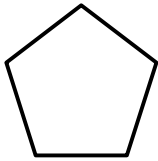
Write the name of each shape.

Word Bank

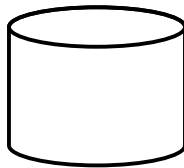
(You will not use all of the words)

octagon	pentagon	hexagon	rectangle
parallelogram	triangle	square	trapezoid
cylinder	rectangular prism	cube	sphere

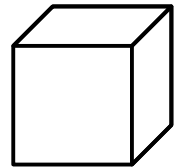
1.



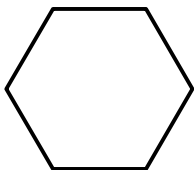
2.



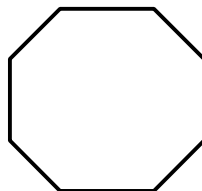
3.



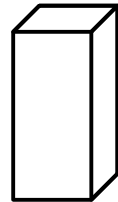
4.



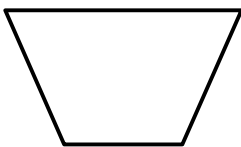
5.



6.



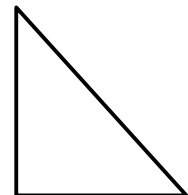
7.



8.



9.



ANSWER KEY

Solids and Polygons

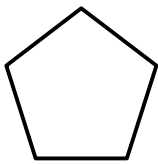
Write the name of each shape.

Word Bank

(You will not use all of the words)

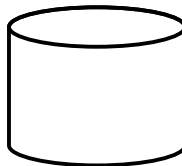
octagon	pentagon	hexagon	rectangle
parallelogram	triangle	square	trapezoid
cylinder	rectangular prism	cube	sphere

1.



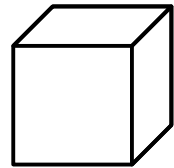
pentagon

2.



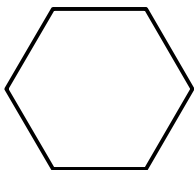
cylinder

3.



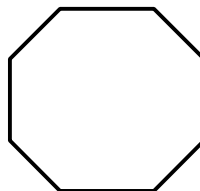
cube

4.



hexagon

5.



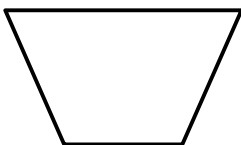
octagon

6.



rectangular prism

7.



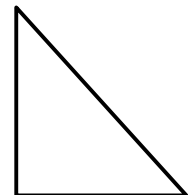
trapezoid

8.



parallelogram

9.



triangle