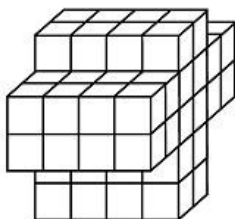


Name: _____

Volume Cubes

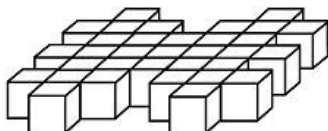
Count the cubes and write the volume of each shape.
The first one has been done for you as an example.

a.

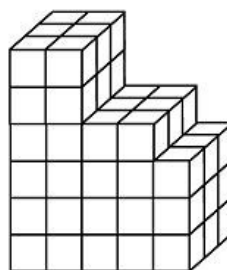


72 cubic units

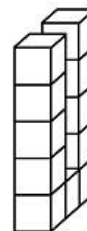
b.



c.



d.



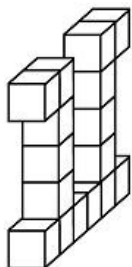
e.

PREVIEW

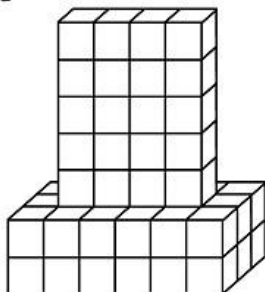
Please log in or register to download the printable version of this worksheet.



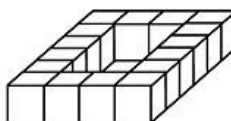
i.



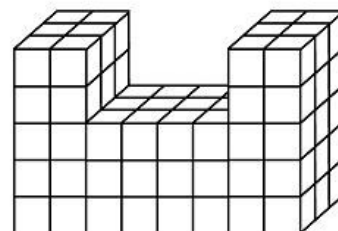
j.



k.



l.

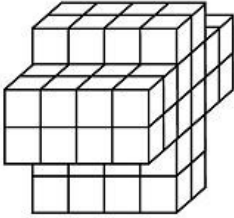


Name: _____

Volume Cubes - Answer Key

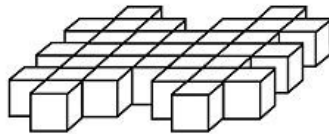
Count the cubes and write the volume of each shape.
The first one has been done for you as an example.

a.



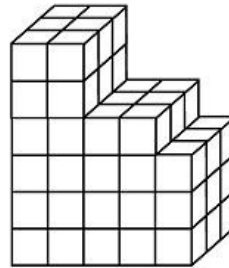
72 cubic units

b.



33 cubic units

c.



69 cubic units

d.



11 cubic units

e.



PREVIEW

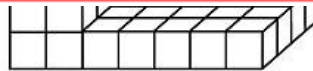
Please log in or register to download the printable version of this worksheet.



64 cubic units



40 cubic units

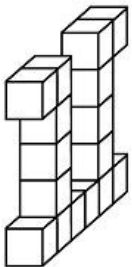


100 cubic units



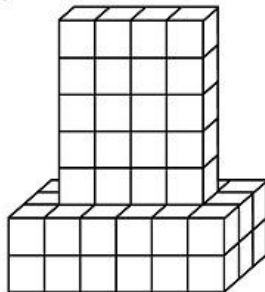
11 cubic units

i.



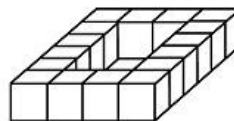
16 cubic units

j.



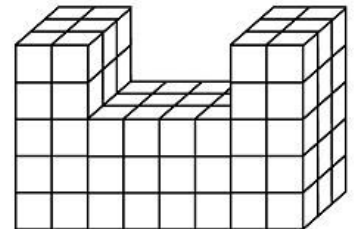
56 cubic units

k.



16 cubic units

l.



96 cubic units