




Name: _____

Stuffed Animals Pictograph

Stuffed Animals Owned By Students

Name	Number of Stuffed Animals
Sara	
Billy	
Jess	



Preview



Please log in to download the printable version of this worksheet.

- How many stuffed animals does Jess have? 2. _____
- How many stuffed animals does Billy have? 3. _____
- Who has the most stuffed animals? 4. _____
- Who has the fewest stuffed animals? 5. _____
- Does Jess or Sara have more stuffed animals? 6. _____
- Who has six stuffed animals? 7. _____

ANSWER KEY

Stuffed Animals Pictograph

Stuffed Animals Owned By Students

Name	Number of Stuffed Animals
Sara	
Billy	

Preview

Please log in to download the printable version of this worksheet.

1.

2.

3.

4.

5.

6. Does Jess or Sara have more stuffed animals?

6. **Jess**

7. Who has six stuffed animals?

7. **Jess**