
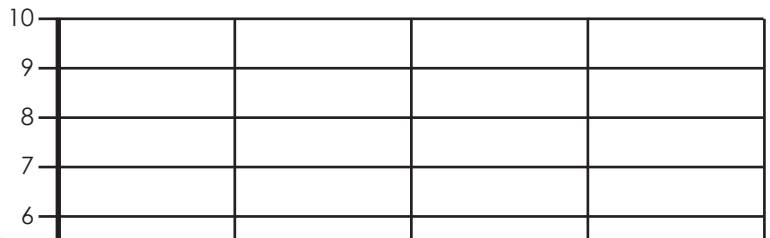


Name: \_\_\_\_\_

# Halloween Bar Graph



Trick or treat! Dion kept a record of how many treats he received from each street. Use the information from his data to fill in the chart and answer the questions.



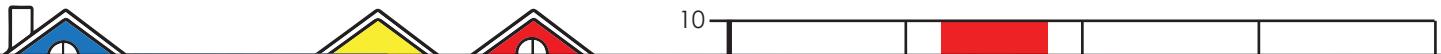

**Preview**  
Please log in to download the printable version of this worksheet.

1. On which street was Dion able to get the most treats? \_\_\_\_\_
2. How many treats did Dion receive from Elm Street? \_\_\_\_\_
3. How many more treats did Dion collect from Wall Street compared to Elm Street? \_\_\_\_\_
4. What is the total number of treats Dion collected? \_\_\_\_\_
5. Which street has the shortest bar and what does that mean?  
\_\_\_\_\_  
\_\_\_\_\_

# ANSWER KEY

## Halloween Bar Graph

Trick or treat. Dion kept a record of how many treats he received from each street. Use the information from his data to fill the chart and answer the questions.



# Preview

Please log in to download the printable version of this worksheet.

