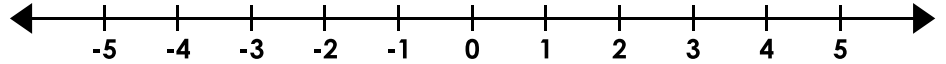


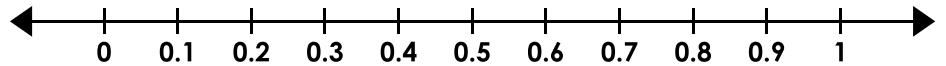
# Inequalities

Graph the inequalities.

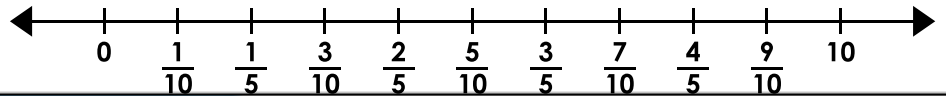
1.  $m < 2(-2)$



2.  $o \leq 1.6 \div 4$




3.  $3\left(\frac{1}{10}\right) \geq n$




## Preview

Please log in to download  
the printable version of this worksheet.

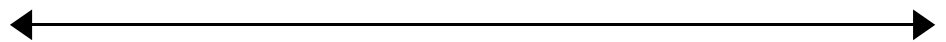
7.  $-5(-3) \leq p$



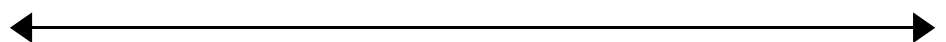
8.  $a > -2.38 \div 0.7$



9.  $w < 1\frac{1}{2}(-1\frac{1}{2})$



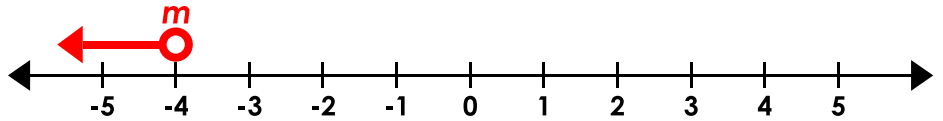
10.  $-15 \div \frac{1}{2} \leq s$



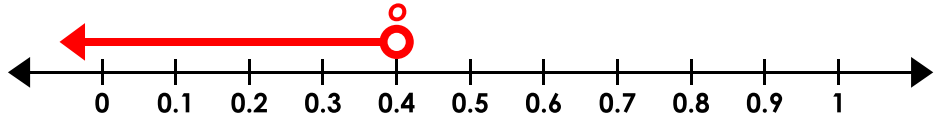
## Inequalities

Graph the inequalities.

1.  $m < 2(-2)$



2.  $o \leq 1.6 \div 4$



3.  $3\left(\frac{1}{10}\right) \geq n$



# Preview

Please log in to download  
the printable version of this worksheet.



(NOTE: For #10, the scale is unimportant as long as it is on -50, the circle is filled, and the arrow points the correct direction.)