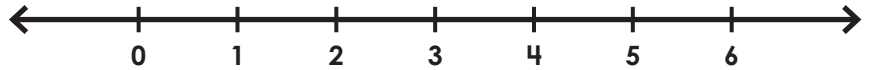


Name: _____

Two-Step Inequalities

Solve and graph the inequalities.

1. $4d - 3 \geq 9$

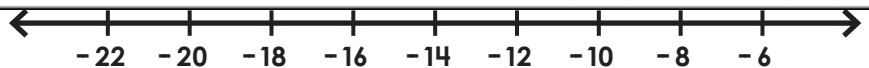


2. $5h + 12 \leq -3$



Preview

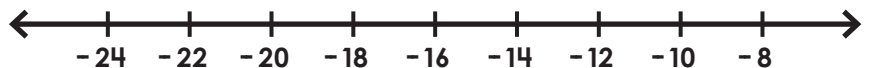
Please log in to download
the printable version of this worksheet.



5. $-2x + 3 \geq 15$



6. $\frac{c}{5} + 6 > 2$

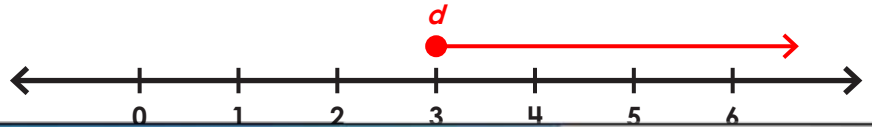


ANSWER KEY

Two-Step Inequalities

Solve and graph the inequalities.

1. $4d - 3 \geq 9$



Preview

Please log in to download the printable version of this worksheet.



6. $\frac{c}{5} + 6 > 2$

$c > -20$

