


Name: _____

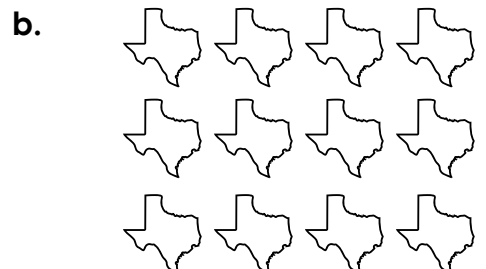

Juneteenth Multiplication Arrays

Write the multiplication fact shown by each array.

example



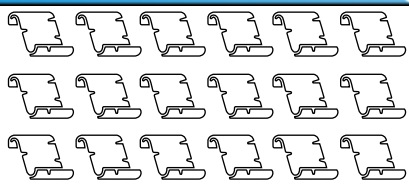


$2 \times 5 = 10$



Preview

Please log in to download the printable version of this worksheet.



ANSWER KEY


Juneteenth Multiplication Arrays

Write the multiplication fact shown by each array.

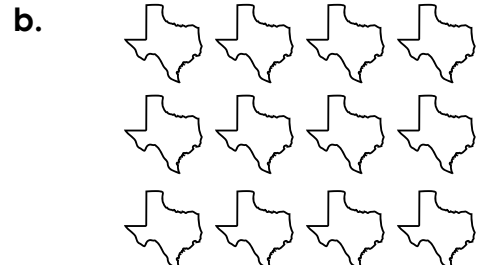
example



$$2 \times 5 = 10$$



$$3 \times 5 = 15$$

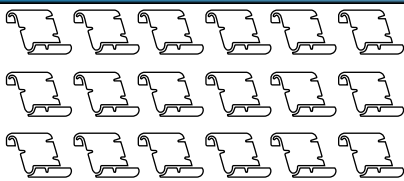


$$3 \times 4 = 12$$



Preview

Please log in to download the printable version of this worksheet.



$$4 \times 6 = 24$$




$$3 \times 8 = 24$$




$$5 \times 10 = 50$$



$$4 \times 9 = 36$$



$$4 \times 8 = 32$$



$$3 \times 7 = 21$$