

Name: _____

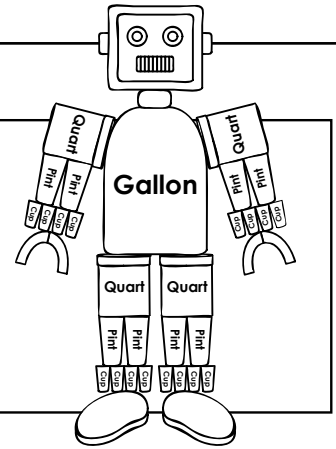
Measuring Capacity

Remember: 1 gallon = 4 quarts = 8 pints = 16 cups

1 gallon = 4 quarts

1 quart = 2 pints

1 pint = 2 cups




Fill in the correct number for each statement.

a. 3 gallons = _____ pints

b. 6 gallons = _____ quarts

c. $\frac{1}{2}$ gallons = _____ pints

d. $\frac{1}{2}$ quart = _____ cups



Preview

Please log in to download
the printable version of this worksheet.

k. 16 pints or $8\frac{1}{2}$ quarts

l. $\frac{1}{2}$ pints or $3\frac{1}{2}$ quarts

Find the best answer and explain.

- m. Each day, Isaac feeds his puppy one cup of dog food in the morning and one cup in the evening. How many quarts of food does Isaac feed his puppy during a week? Explain how you found your answer.

answer: _____

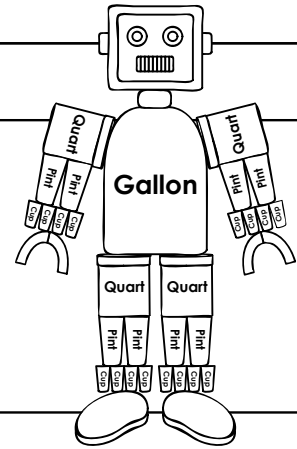
explain: _____

ANSWER KEY

Measuring Capacity

Remember:

- 1 gallon = 4 quarts = 8 pints = 16 cups
- 1 gallon = 4 quarts
- 1 quart = 2 pints
- 1 pint = 2 cups



Fill in the correct number for each statement.

- a.
- c.
- e.
- Circle
- g.
- i.
- k.
- Find
- m.

Preview

Please log in to download the printable version of this worksheet.



explain. He feeds his puppy 7 pints per week. 7 pints is equal to 2 quarts.