

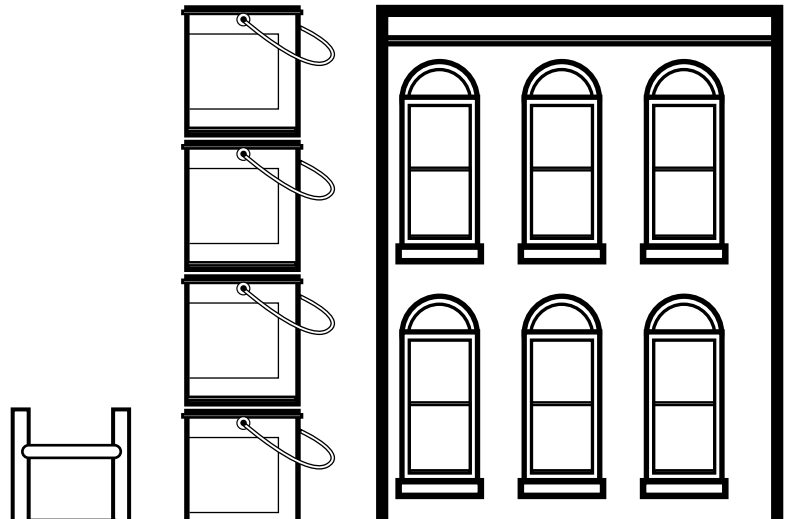
Name: _____

Measurement

This house is _____
buckets high.

This ladder is _____
buckets high.

This house is _____
ladders high.



Preview

Please log in to download
the printable version of this worksheet.




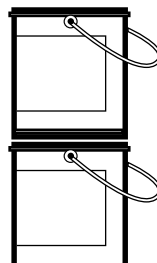
This paint brush is _____ paper clips long.

This crayon is _____ paper clips long.

This paint brush is _____ crayons long.

Measurement

This house is 6
buckets high.



This ladder is 3
buckets high.

This
ladder

Preview

Please log in to download
the printable version of this worksheet.



This paint brush is 8 paper clips long.

This crayon is 4 paper clips long.

This paint brush is 2 crayons long.