

Name: _____








Easter Multiplication Arrays

Write the multiplication fact shown by each array.

example



$$2 \times 5 = 10$$



Preview

Please log in to download the printable version of this worksheet.

ANSWER KEY

Easter Multiplication Arrays

Write the multiplication fact shown by each array.


example



$$2 \times 5 = 10$$



$$3 \times 4 = 12$$




$$4 \times 8 = 32$$




Preview


Please log in to download the printable version of this worksheet.




$$4 \times 7 = 28$$



$$4 \times 4 = 16$$




$$5 \times 7 = 35$$



$$3 \times 3 = 9$$



$$4 \times 6 = 24$$



$$3 \times 8 = 24$$