

Name: _____



St. Patrick's Day Multiplication Arrays

Write the multiplication fact shown by each array.

example







$$2 \times 5 = 10$$



Preview

Please log in to download the printable version of this worksheet.



ANSWER KEY


St. Patrick's Day Multiplication Arrays

Write the multiplication fact shown by each array.


example



$$2 \times 5 = 10$$



$$2 \times 4 = 8$$



$$4 \times 8 = 32$$




Preview


Please log in to download the printable version of this worksheet.




$$3 \times 5 = 15$$




$$6 \times 7 = 42$$




$$5 \times 6 = 30$$



$$3 \times 6 = 18$$



$$3 \times 3 = 9$$



$$4 \times 9 = 36$$