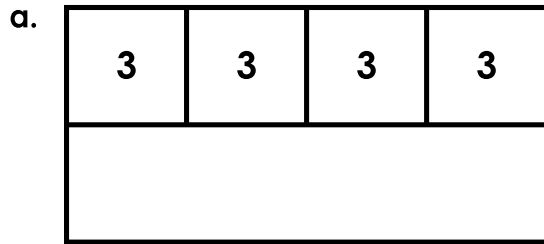


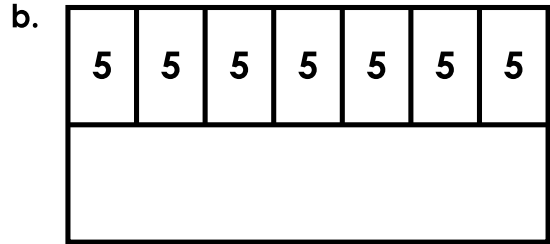
Name: _____

Multiplication With Bar Models

Complete the bar models. Then write a multiplication fact for each.



_____ × _____ = _____



_____ × _____ = _____



_____ × _____ = _____

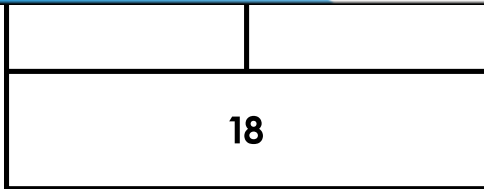


_____ × _____ = _____



Preview

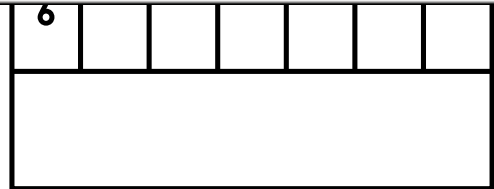
Please log in to download the printable version of this worksheet.



_____ × _____ = _____

g. Draw a bar model to show 4×4 .

_____ × _____ = _____



_____ × _____ = _____

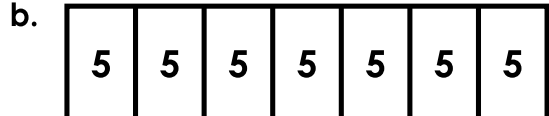
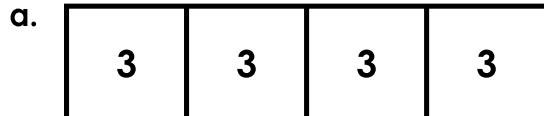
h. Draw a bar model to show 8×2 .

_____ × _____ = _____

ANSWER KEY

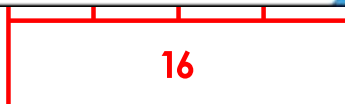
Multiplication With Bar Models

Complete the bar models. Then write a multiplication fact for each.



Preview

Please log in to download
the printable version of this worksheet.



or



$$\underline{4} \times \underline{4} = \underline{16}$$

$$\underline{8} \times \underline{2} = \underline{16}$$