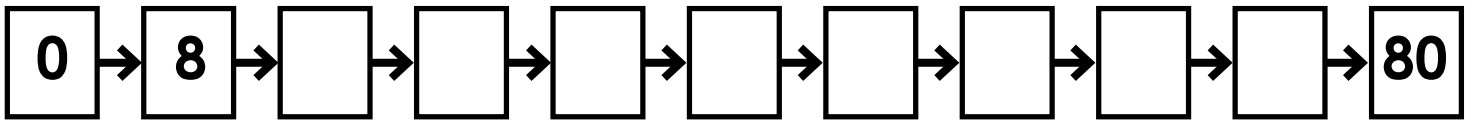


Name: _____

Multiply by 8s

Skip count by 8s.

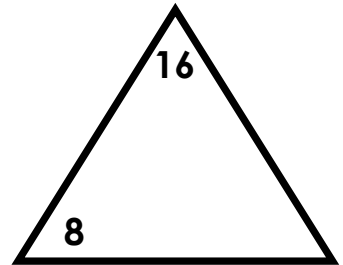
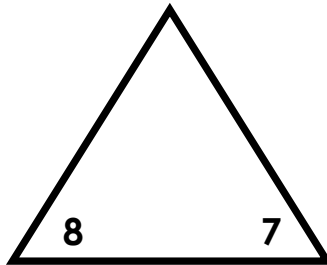
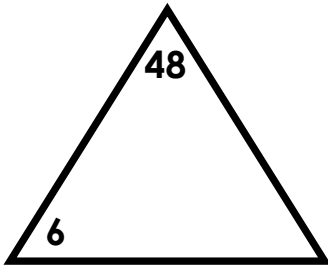


Complete the Input/Output Table.

Input	8	6	9	4	7	3	5	10	1	0
Output										

Rule: Multiply by 8

Write the number missing from each fact family.



Compare. $<$, $>$, or $=$




$7 \times 8 \quad \square \quad 50$

$8 \times 4 \quad \square \quad 4 \times 8$

$45 \quad \square \quad 5 \times 8$

$9 \times 8 \quad \square \quad 70$

What fact is shown by the illustration?



_____ X _____ = _____

ANSWER KEY

Multiply by 8s

Skip count by 8s.

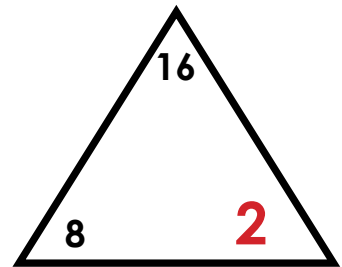
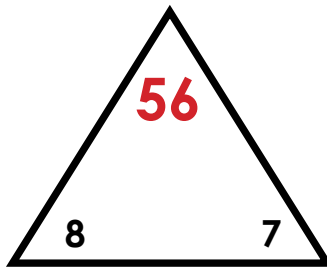
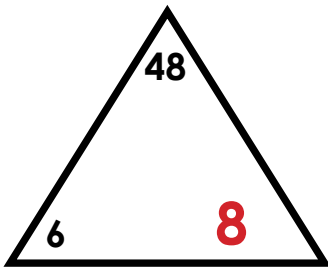


Complete the Input/Output Table.

Input	8	6	9	4	7	3	5	10	1	0
Output	64	48	72	32	56	24	40	80	8	0

Rule: Multiply by 8

Write the number missing from each fact family.



Compare. $<$, $>$, or $=$




$$7 \times 8 \quad > \quad 50$$

$$8 \times 4 \quad = \quad 4 \times 8$$

$$45 \quad > \quad 5 \times 8$$

$$9 \times 8 \quad > \quad 70$$

What fact is shown by the illustration?



$$\underline{8} \times \underline{3} = \underline{24}$$