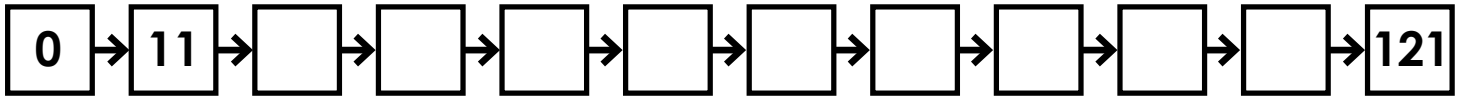


Name: _____

Multiply by 11s

Skip count by 11s.



Complete the multiplication table.

X	11	3	7	9	6	5	0	1	8	4	2	10
11												

Write the missing factors.

$11 \times \underline{\quad} = 121$ $\underline{\quad} \times 11 = 99$ $11 \times \underline{\quad} = 77$

$\underline{\quad} \times 3 = 33$ $11 \times \underline{\quad} = 110$ $11 \times \underline{\quad} = 66$

Compare. <, >, or =

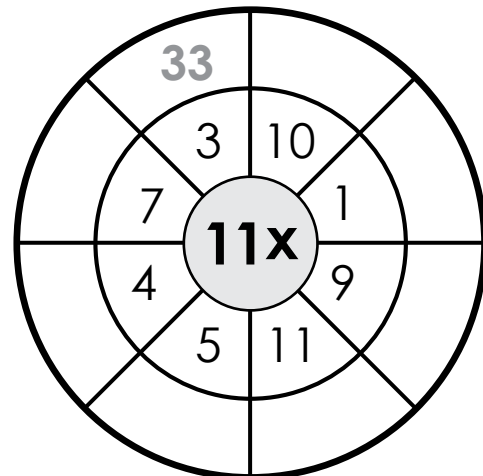
11×4 3×11

88 8×11

11×5 7×11

11×3 44

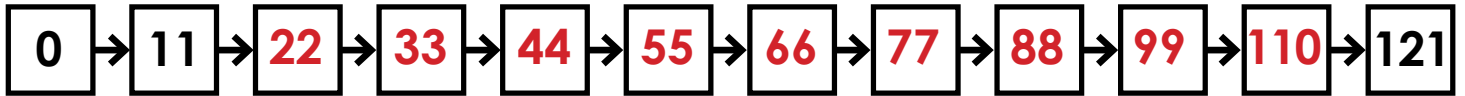
Complete the multiplication wheel.



ANSWER KEY

Multiply by 11s

Skip count by 11s.



Complete the multiplication table.

X	11	3	7	9	6	5	0	1	8	4	2	10
11	121	33	77	99	66	55	0	11	88	44	22	110

Write the missing factors.

$11 \times \underline{11} = 121$ $\underline{9} \times 11 = 99$ $11 \times \underline{7} = 77$

$\underline{11} \times 3 = 33$ $11 \times \underline{10} = 110$ $11 \times \underline{6} = 66$

Compare. <, >, or =

$11 \times 4 \quad \boxed{>} \quad 3 \times 11$

$88 \quad \boxed{=} \quad 8 \times 11$

$11 \times 5 \quad \boxed{<} \quad 7 \times 11$

$11 \times 3 \quad \boxed{<} \quad 44$

Complete the multiplication wheel.

