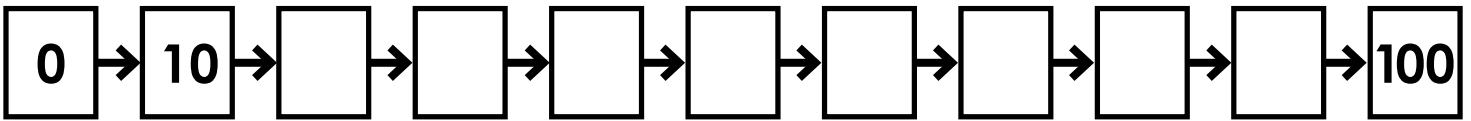


Name: _____

Multiply by 10s

Skip count by 10s.



Complete the multiplication table.

X	2	5	6	8	7	4	0	3	1	10	9
10											

Write the missing factors.

$10 \times \underline{\quad} = 30$

$10 \times \underline{\quad} = 80$

$\underline{\quad} \times 5 = 50$

$\underline{\quad} \times 10 = 10$

$10 \times \underline{\quad} = 100$

$6 \times \underline{\quad} = 60$

Compare. <, >, or =

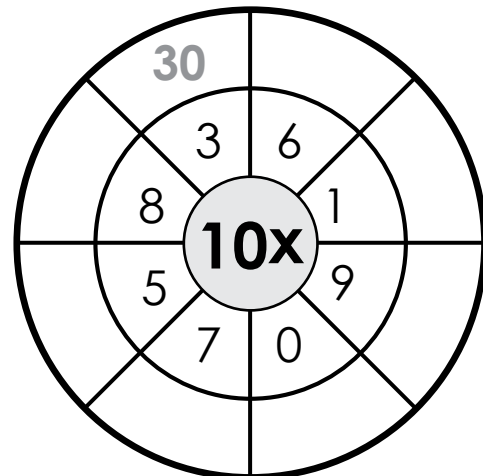
$4 \times 10 \quad \square \quad 35$

$50 \quad \square \quad 6 \times 10$

$7 \times 10 \quad \square \quad 10 \times 8$

$10 \times 1 \quad \square \quad 10$


Complete the multiplication wheel.



ANSWER KEY

Multiply by 10s

Skip count by 10s.



Complete the multiplication table.

X	2	5	6	8	7	4	0	3	1	10	9
10	20	50	60	80	70	40	0	30	10	100	90

Write the missing factors.

$10 \times \underline{3} = 30$

$10 \times \underline{8} = 80$

$\underline{10} \times 5 = 50$

$\underline{1} \times 10 = 10$

$10 \times \underline{10} = 100$

$6 \times \underline{10} = 60$

Compare. <, >, or =

$4 \times 10 \boxed{>} 35$

$50 \boxed{<} 6 \times 10$

$7 \times 10 \boxed{<} 10 \times 8$

$10 \times 1 \boxed{=} 10$

Complete the multiplication wheel.

