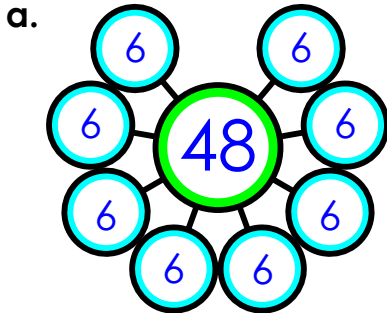


Name: \_\_\_\_\_

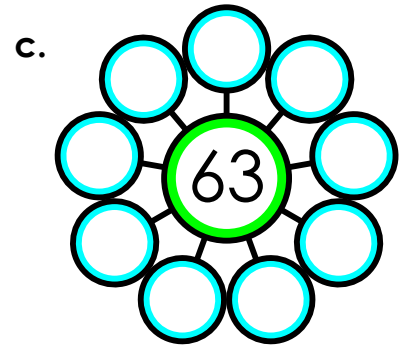
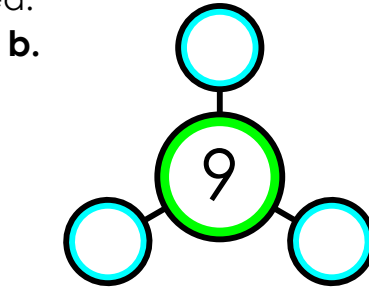
# Number Bonds

Multiplication & Division

Use multiplication and division to fill in the missing number or numbers of each number bond. Write the fact in the space provided.



$8 \times 6 = 48$

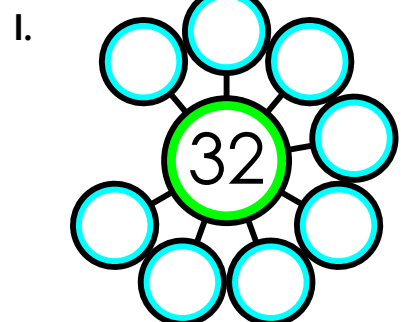
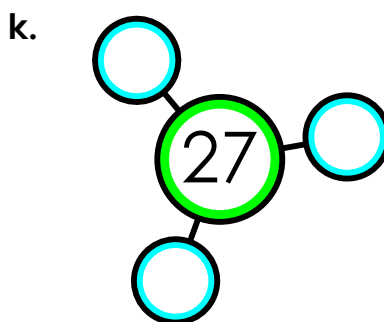
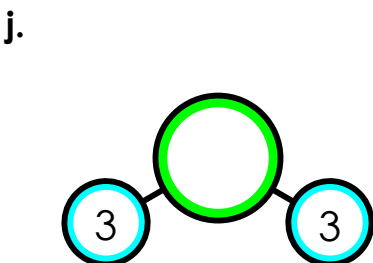
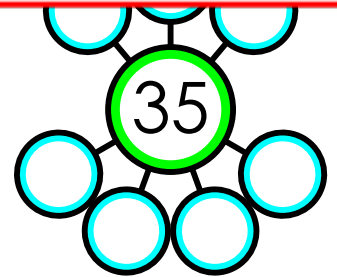

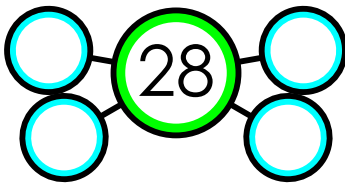


f. \_\_\_\_\_



# ~ PREVIEW ~

Please log in or register to download the printable version of this worksheet.



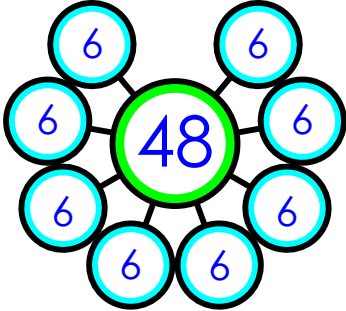
# ANSWER KEY

## Number Bonds

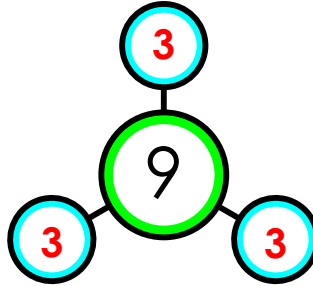
Multiplication & Division

Use multiplication and division to fill in the missing number or numbers of each number bond. Write the fact in the space provided.

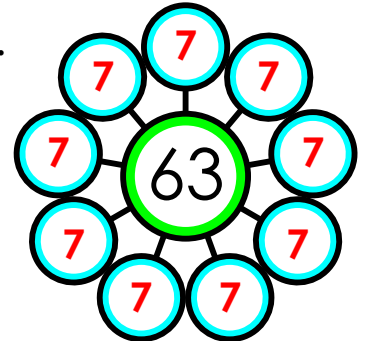
a.



b.



c.



# ~ PREVIEW ~

Please log in or register to download  
the printable version of this worksheet.

$$2 \times 3 = 6$$

$$3 \times 9 = 27$$

$$8 \times 4 = 32$$