



Name: _____

Shape Multiplication



Find the product of the numbers in the hexagons.

Find the product of the numbers in the triangles.

Find the product of the numbers in the octagons.



Preview




Please log in to download
the printable version of this worksheet.

Find the product of the numbers in the squares.

Find the product of the numbers in the trapezoids.

Find the product of the numbers in the circles.

Shape Multiplication



Find the product of the numbers in the hexagons.

Find the product of the numbers in the triangles.

Find the product of the numbers in the octagons.



Preview

Please log in to download the printable version of this worksheet.

408

252

810

Find the product of the numbers in the squares.

$$\begin{array}{r} 85 \\ \times 6 \\ \hline 510 \end{array}$$

Find the product of the numbers in the trapezoids.

$$\begin{array}{r} 40 \\ \times 3 \\ \hline 120 \end{array}$$

Find the product of the numbers in the circles.

$$\begin{array}{r} 76 \\ \times 5 \\ \hline 380 \end{array}$$