







Name: \_\_\_\_\_

## Shape Multiplication



Find the product of the numbers in the octagons.

Find the product of the numbers in the trapezoids.

Find the product of the numbers in the triangles.



# Preview





Please log in to download  
the printable version of this worksheet.

Find the product of the numbers in the hexagons.

Find the product of the numbers in the circles.

Find the product of the numbers in the squares.

## Shape Multiplication



Find the product of the numbers in the octagons.

Find the product of the numbers in the triangles.

Find the product of the numbers in the squares.



# Preview

Please log in to download the printable version of this worksheet.

Find the product of the numbers in the hexagons.

$$\begin{array}{r} 213 \\ \times 5 \\ \hline 1,065 \end{array}$$

Find the product of the numbers in the circles.

$$\begin{array}{r} 812 \\ \times 6 \\ \hline 4,872 \end{array}$$

Find the product of the numbers in the squares.

$$\begin{array}{r} 208 \\ \times 7 \\ \hline 1,456 \end{array}$$