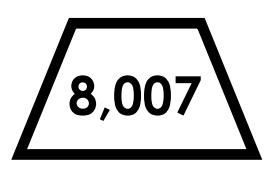




Name: _____

Shape Multiplication



Find the product of the numbers in the octagons.

Find the product of the numbers in the trapezoids.

Find the product of the numbers in the triangles.



Preview

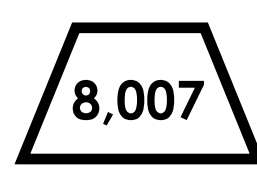


Please log in to download
the printable version of this worksheet.

Find the product of the numbers in the hexagons.

Find the product of the numbers in the circles.

Find the product of the numbers in the squares.

Shape Multiplication



Find the product of the numbers in the octagons.

Find the product of the numbers in the trapezoids.

Find the product of the numbers in the triangles.



Preview

Please log in to download the printable version of this worksheet.

Find the product of the numbers in the hexagons.

$$\begin{array}{r} \text{Hexagon: } 2,308 \\ \times \text{Hexagon: } 6 \\ \hline 13,848 \end{array}$$

Find the product of the numbers in the circles.

$$\begin{array}{r} \text{Circle: } 6,789 \\ \times \text{Circle: } 3 \\ \hline 20,367 \end{array}$$

Find the product of the numbers in the squares.

$$\begin{array}{r} \text{Square: } 7,018 \\ \times \text{Square: } 8 \\ \hline 56,144 \end{array}$$