

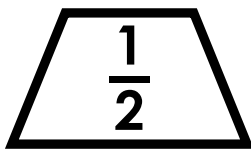


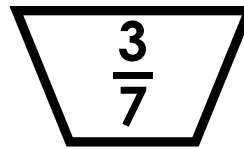


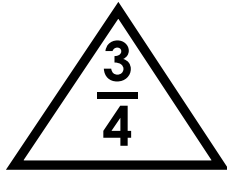


Name: _____

Shape Multiplication



Find the product of the fractions in the hexagons. Write the answer in simplest form.

Find the product of the fractions in the triangles. Write the answer in simplest form.

Find the product of the fractions in the octagons. Write the answer in simplest form.



Preview


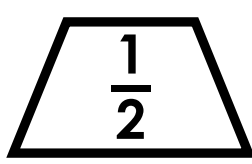
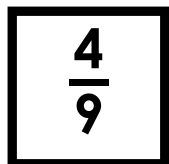

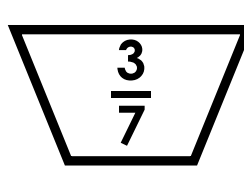
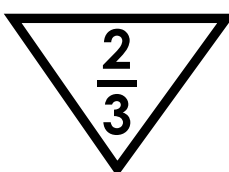


Please log in to download the printable version of this worksheet.

Find the product of the fractions in the squares. Write the answer in simplest form.

Find the product of the fractions in the trapezoids. Write the answer in simplest form.

Find the product of the fractions in the circles. Write the answer in simplest form.

Shape Multiplication



Find the product of the fractions in the hexagons. Write the answer in simplest form.

Find the product of the fractions in the triangles. Write the answer in simplest form.

Find the product of the fractions in the circles. Write the answer in simplest form.



Preview

Please log in to download the printable version of this worksheet.

Find the product of the fractions in the squares. Write the answer in simplest form.

$$\frac{4}{9} \times \frac{1}{3} = \frac{4}{27}$$

Find the product of the fractions in the trapezoids. Write the answer in simplest form.

$$\frac{3}{7} \times \frac{1}{2} = \frac{3}{14}$$

Find the product of the fractions in the circles. Write the answer in simplest form.

$$\frac{1}{5} \times \frac{1}{2} = \frac{1}{10}$$