



Name: _____

Shape Multiplication



Find the product of the numbers in the hexagons.

Find the product of the numbers in the squares.

Find the product of the numbers in the triangles.



Preview

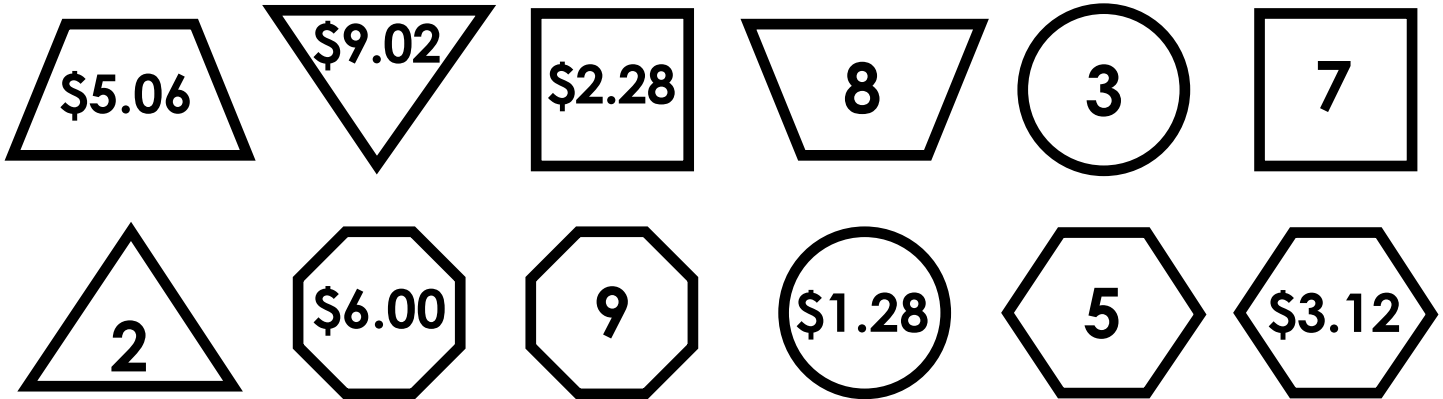
Please log in to download
the printable version of this worksheet.

Find the product of the numbers in the octagons.

Find the product of the numbers in the circles.

Find the product of the numbers in the trapezoids.

Shape Multiplication



Find the product of the numbers in the hexagons.

Find the product of the numbers in the squares.

Find the product of the numbers in the triangles.



Preview

Please log in to download the printable version of this worksheet.

Find the product of the numbers in the octagons.

$$\begin{array}{r} \text{\$6.00} \\ \times \text{\ 9} \\ \hline \text{\$54.00} \end{array}$$

Find the product of the numbers in the circles.

$$\begin{array}{r} \text{\$1.28} \\ \times \text{\ 3} \\ \hline \text{\$3.84} \end{array}$$

Find the product of the numbers in the trapezoids.

$$\begin{array}{r} \text{\$5.06} \\ \times \text{\ 8} \\ \hline \text{\$40.48} \end{array}$$