


Name: _____


It's Almost the New Year!

Look at each clock and write the time. Then, write how much longer until midnight.




time: _____ pm

How long until the new year? _____




time: _____ pm

How long until the new year? _____




time: _____ pm

How long until the new year? _____




time: _____ pm

How long until the new year? _____



time: _____ pm

How long until the new year? _____




time: _____ pm

How long until the new year? _____

ANSWER KEY


It's Almost the New Year!

Look at each clock and write the time. Then, write how much longer until midnight.




time: **11:25** pm

How long until the new year? **35 minutes**




time: **10:45** pm

How long until the new year? **1 hour and 15 minutes**




time: **10:05** pm

How long until the new year? **1 hour and 55 minutes**




time: **11:55** pm

How long until the new year? **5 minutes**



time: **10:40** pm

How long until the new year? **1 hour and 20 minutes**



time: **11:15** pm

How long until the new year? **45 minutes**