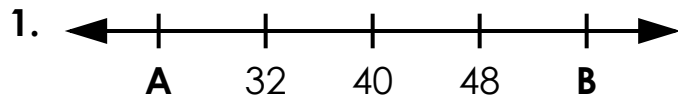


Name: _____

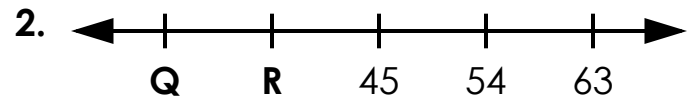
Number Lines

Write the missing numbers for each number line.



A = _____

B = _____




Q = _____

R = _____



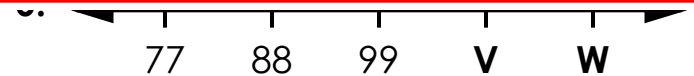
~ PREVIEW ~

Please log in or register to download the printable version of this worksheet.



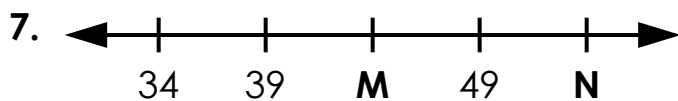
H = _____

I = _____



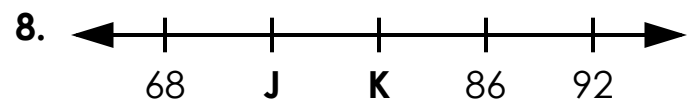
V = _____

W = _____



M = _____

N = _____



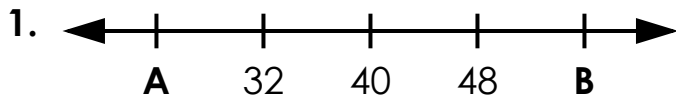
J = _____

K = _____

ANSWER KEY

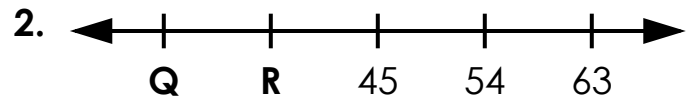
Number Lines

Write the missing numbers for each number line.



A = 24

B = 56



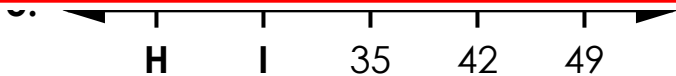
Q = 27

R = 36



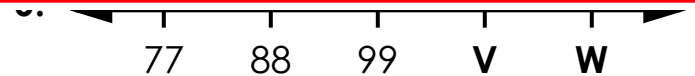
~ PREVIEW ~

Please log in or register to download the printable version of this worksheet.



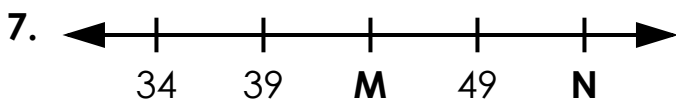
H = 21

I = 28



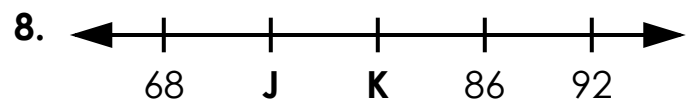
V = 110

W = 121



M = 44

N = 54



J = 74

K = 80