
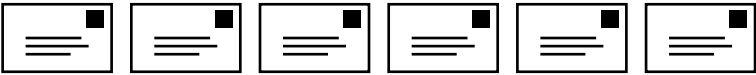




Name: _____

Post Office Pictograph

The pictograph below shows how much mail was processed by the Stowe Post Office. Use the pictograph to answer the questions.

DAY	PIECES OF MAIL PROCESSED AT THE STOWE POST OFFICE
Mon., July 6	
Tues., July 7	
Weds., July 8	
Thurs., July 9	



~ PREVIEW ~

Please log in or register to download the printable version of this worksheet.


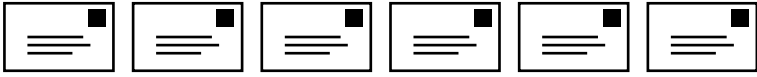

- Which day did they process the most mail? _____
- How much more mail was processed on Thursday than Monday? _____
- A post office employee says, "We always process more mail on Mondays than we do on Tuesdays." Is this true? Explain your answer.

- How many symbols would be used to represent 3,000 pieces of mail on the pictograph? _____
- 11,000 pieces of mail were processed on July 10. Complete the pictograph to show this amount.

ANSWER KEY

Post Office Pictograph

The pictograph below shows how much mail was processed by the Stowe Post Office. Use the pictograph to answer the questions.

DAY	PIECES OF MAIL PROCESSED AT THE STOWE POST OFFICE
Mon., July 6	
Tues., July 7	
Wed., July 8	



~ PREVIEW ~

Please log in or register to download the printable version of this worksheet.