

Name: _____

Place Value

Count the beads on each abacus and write the number they form.

a.

○○○○○○○○	ONES
●●●●●	TENS
●●	HUND.

b.

	ONES
●●●●●●●●	TENS
●●●●●●	HUND.

c.

○○	ONES
	TENS
●●●●●●●●	HUND.



	ONES
	TENS
●●●●●●●●	HUND.

e.

○○○○○	ONES
●●●●●●●●	TENS
	HUND.

f.

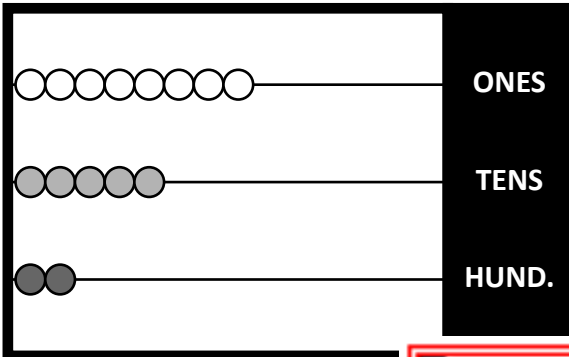
○○○○○○○○	ONES
●●●●	TENS
●●●●	HUND.

ANSWER KEY

Place Value

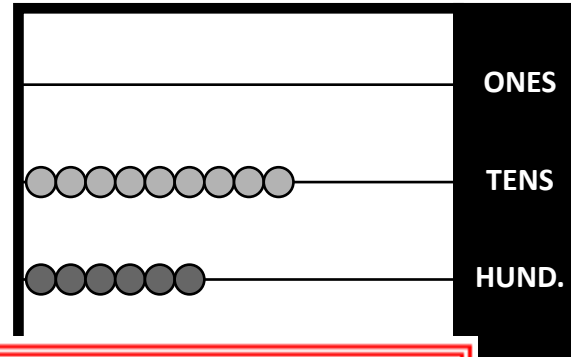
Count the beads on each abacus and write the number they form.

a.



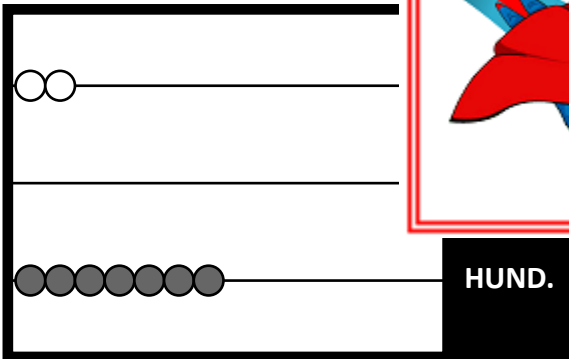
258

b.



690


c.



702

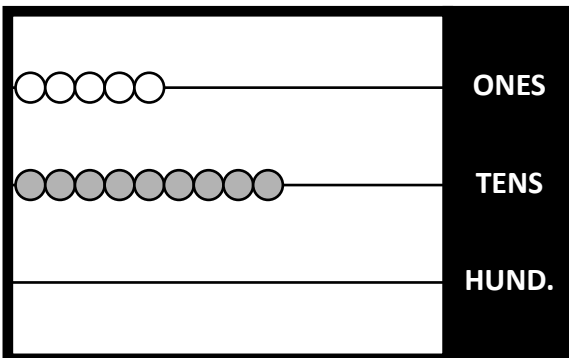


PREVIEW
Please log in or register to download the printable version of this worksheet.



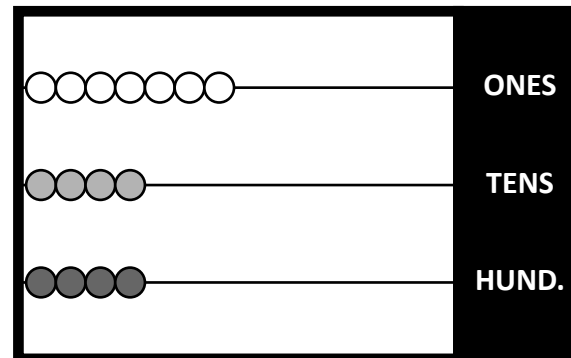
813

e.



95

f.



447