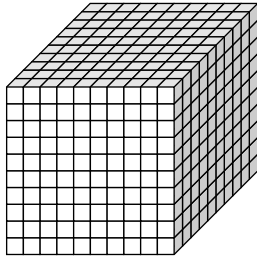
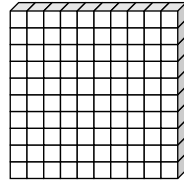


Name: \_\_\_\_\_

# Place Value



One Thousand



One Hundred

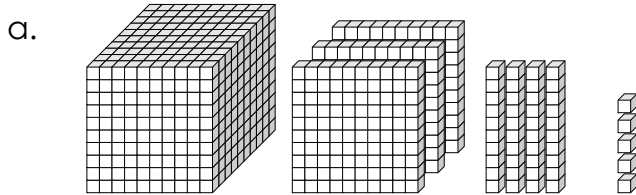


Ten

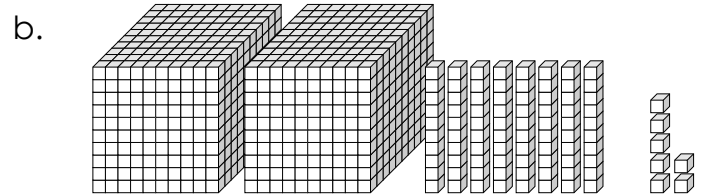


One

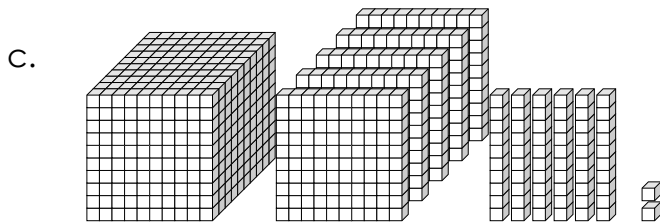
Write each number in standard form.



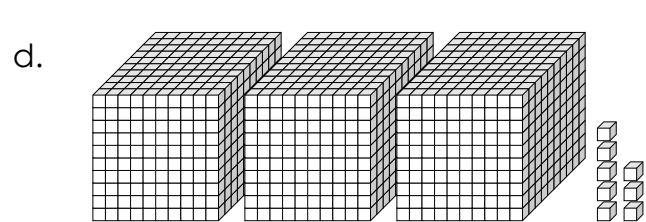
\_\_\_\_\_



\_\_\_\_\_



\_\_\_\_\_



\_\_\_\_\_

e.  $6,000 + 100 + 40 + 3$

\_\_\_\_\_

f.  $9,000 + 900 + 90 + 9$

\_\_\_\_\_

g.  $4,000 + 60 + 1$

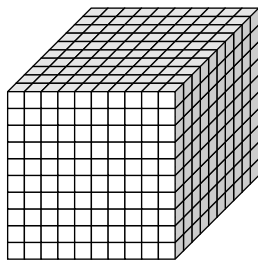
\_\_\_\_\_

h.  $7,000 + 800$

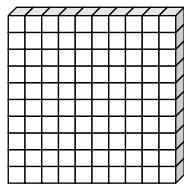
\_\_\_\_\_

# ANSWER KEY

## Place Value



One Thousand



One Hundred

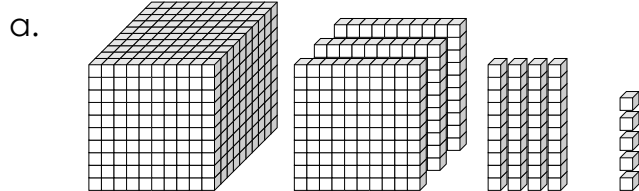


Ten

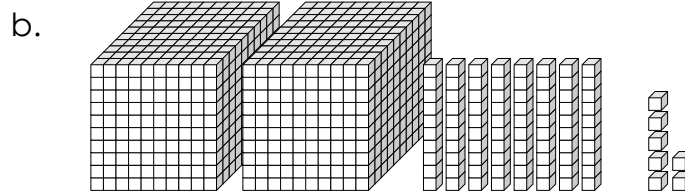


One

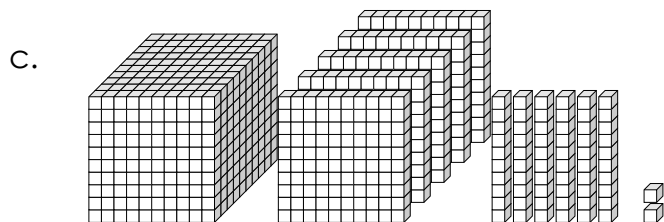
Write each number in standard form.



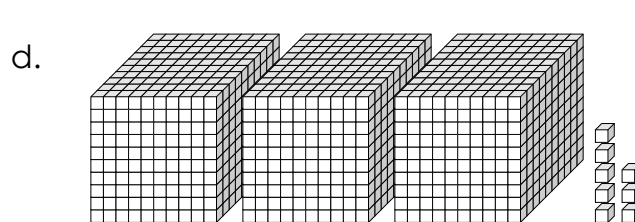
**1,345**



**2,087**



**1,562**



**3,008**

e.  $6,000 + 100 + 40 + 3$

**6,143**

f.  $9,000 + 900 + 90 + 9$

**9,999**

g.  $4,000 + 60 + 1$

**4,061**

h.  $7,000 + 800$

**7,800**