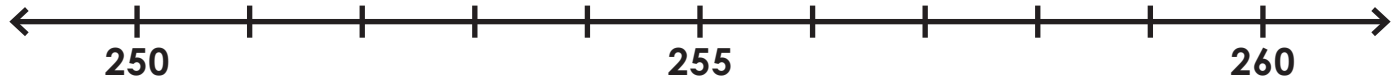


Name: _____

Rounding

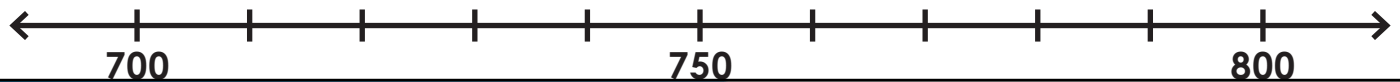
Find 256 on the number line and label it.



Is 256 closer to 250 or 260? _____

What is 256 rounded to the nearest ten? _____

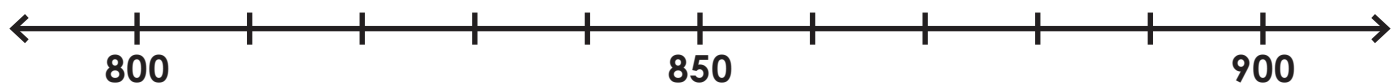
Find 731 on the number line and label it.



Is 474 closer to 470 or 480? _____

What is 474 rounded to the nearest ten? _____

Find 873 on the number line and label it.

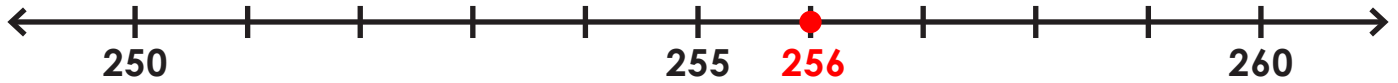


Is 873 closer to 800 or 900? _____

What is 873 rounded to the nearest hundred? _____

Rounding

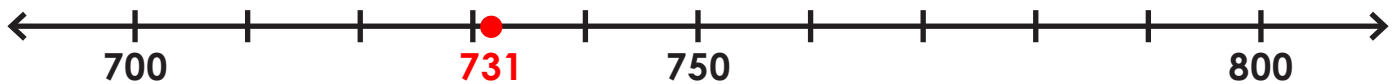
Find 256 on the number line and label it.



Is 256 closer to 250 or 260? 260

What is 256 rounded to the nearest ten? 260

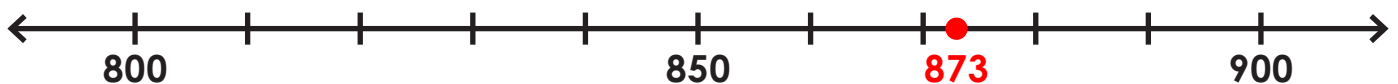
Find 731 on the number line and label it.



Is 474 closer to 470 or 480? 480

What is 474 rounded to the nearest ten? 480

Find 873 on the number line and label it.



Is 873 closer to 800 or 900? 900

What is 873 rounded to the nearest hundred? 900